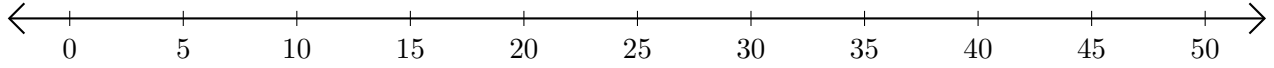


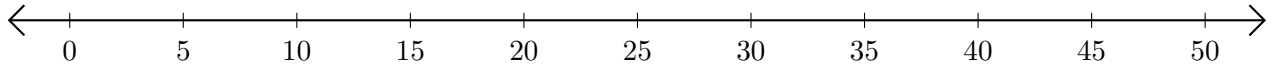
Opérations sur Une Droite Graduée (D)

Utilisez la droite graduée pour calculer chaque somme ou différence.

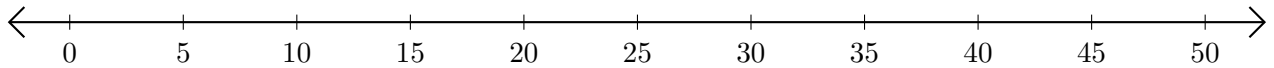
1. $5 + 30 = \underline{\quad}$



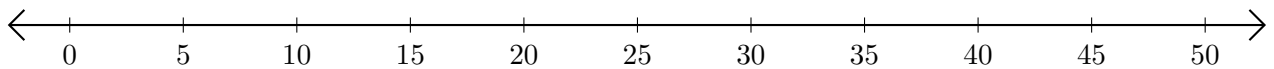
2. $25 - 15 = \underline{\quad}$



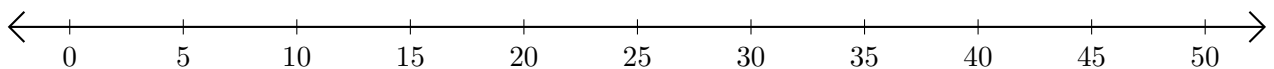
3. $30 + 5 = \underline{\quad}$



4. $50 - 35 = \underline{\quad}$



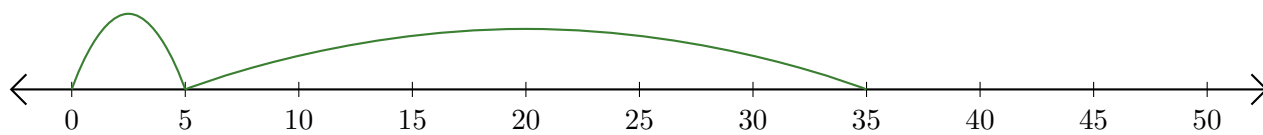
5. $30 - 25 = \underline{\quad}$



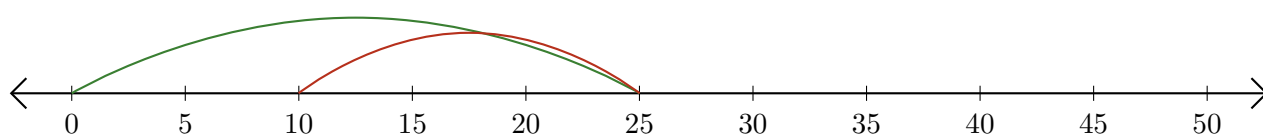
Opérations sur Une Droite Graduée (D) Réponses

Utilisez la droite graduée pour calculer chaque somme ou différence.

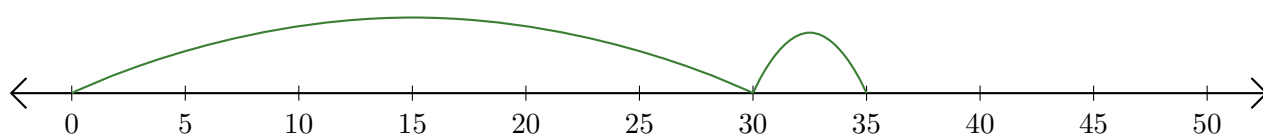
1. $5 + 30 = \underline{35}$



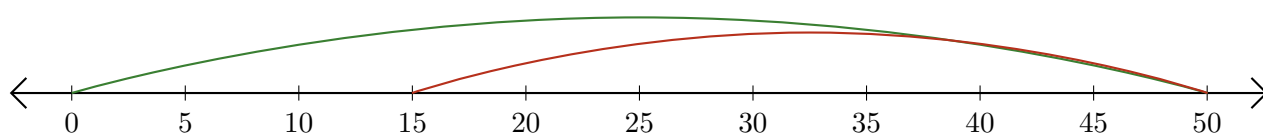
2. $25 - 15 = \underline{10}$



3. $30 + 5 = \underline{35}$



4. $50 - 35 = \underline{15}$



5. $30 - 25 = \underline{5}$

