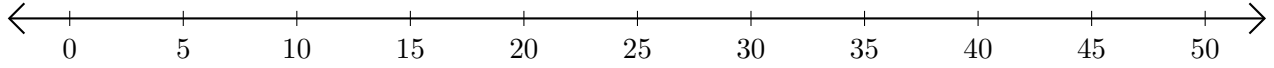


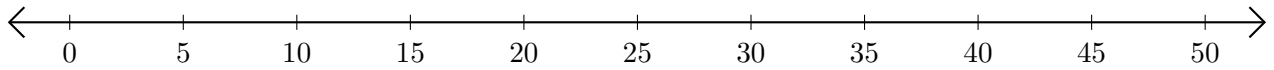
Opérations sur Une Droite Graduée (C)

Utilisez la droite graduée pour calculer chaque somme ou différence.

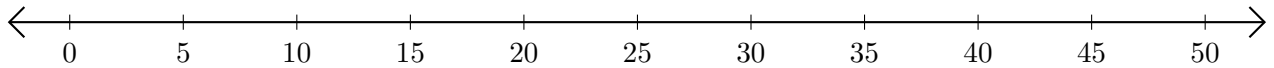
1. $5 + 20 = \underline{\quad}$



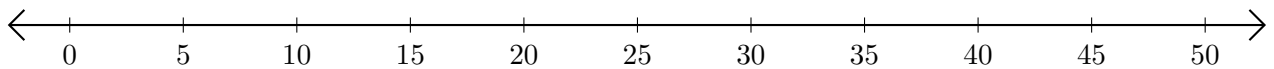
2. $35 - 25 = \underline{\quad}$



3. $35 + 15 = \underline{\quad}$



4. $20 - 10 = \underline{\quad}$



5. $30 + 5 = \underline{\quad}$

