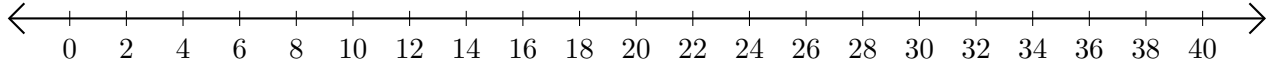


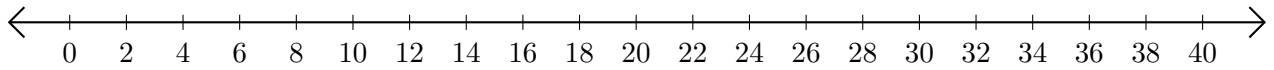
Opérations sur Une Droite Graduée (I)

Utilisez la droite graduée pour calculer chaque somme ou différence.

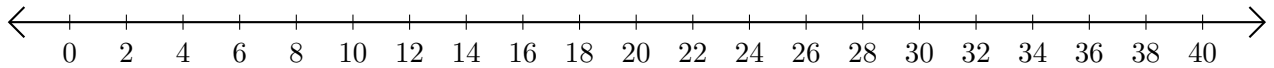
1. $22 + 10 = \underline{\quad}$



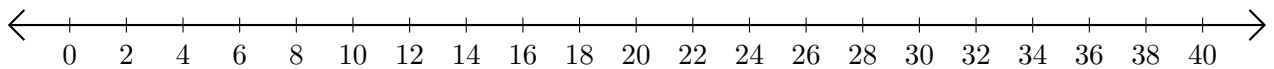
2. $28 - 26 = \underline{\quad}$



3. $30 + 2 = \underline{\quad}$



4. $28 - 10 = \underline{\quad}$



5. $30 - 14 = \underline{\quad}$

