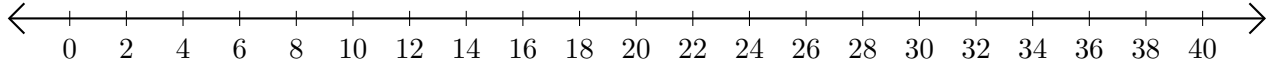


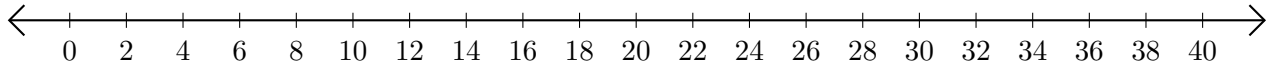
Opérations sur Une Droite Graduée (D)

Utilisez la droite graduée pour calculer chaque somme ou différence.

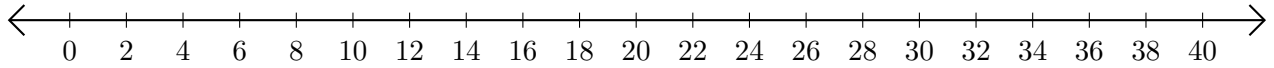
1. $30 + 10 = \underline{\quad}$



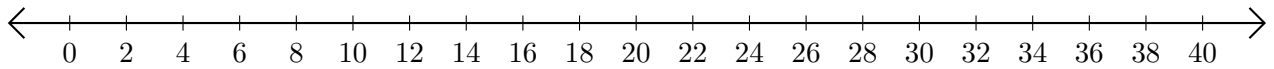
2. $28 - 8 = \underline{\quad}$



3. $34 + 4 = \underline{\quad}$



4. $38 - 2 = \underline{\quad}$



5. $38 - 10 = \underline{\quad}$

