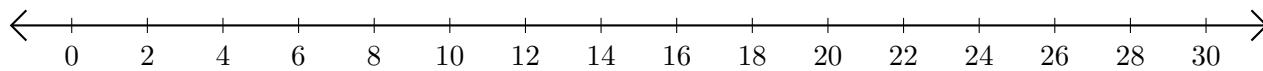


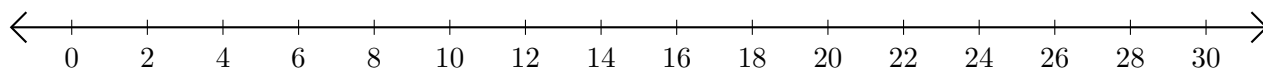
Opérations sur Une Droite Graduée (J)

Utilisez la droite graduée pour calculer chaque somme ou différence.

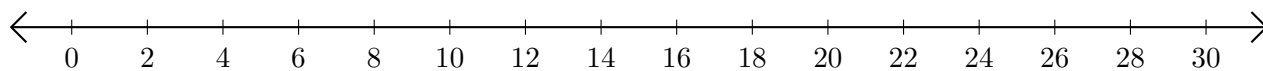
1. $18 + 8 = \underline{\quad}$



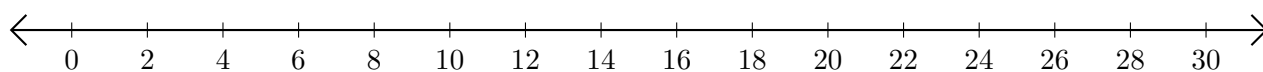
2. $22 - 8 = \underline{\quad}$



3. $24 + 2 = \underline{\quad}$



4. $10 - 2 = \underline{\quad}$



5. $16 + 14 = \underline{\quad}$

