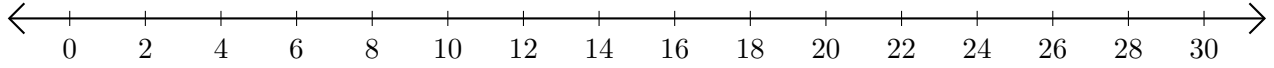


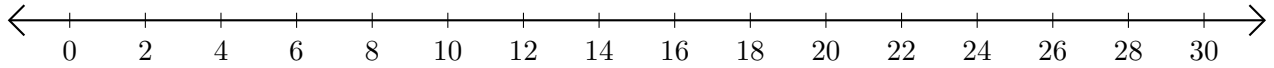
# Opérations sur Une Droite Graduée (A)

Utilisez la droite graduée pour calculer chaque somme ou différence.

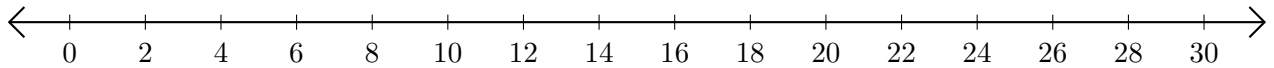
1.  $14 + 16 = \underline{\quad}$



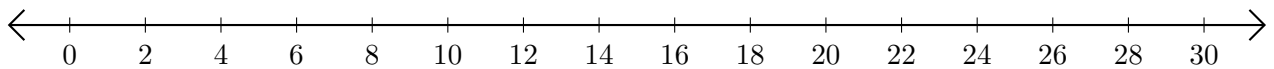
2.  $30 - 10 = \underline{\quad}$



3.  $26 + 2 = \underline{\quad}$



4.  $30 - 28 = \underline{\quad}$



5.  $22 + 8 = \underline{\quad}$

