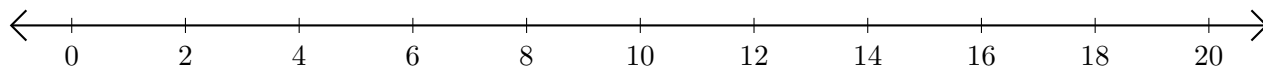


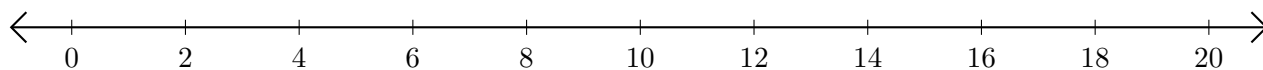
Opérations sur Une Droite Graduée (I)

Utilisez la droite graduée pour calculer chaque somme ou différence.

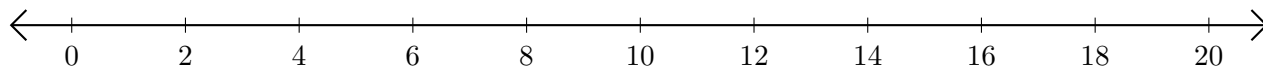
1. $16 + 2 = \underline{\quad}$



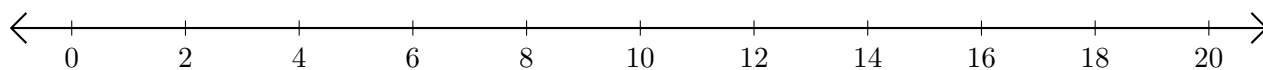
2. $14 - 8 = \underline{\quad}$



3. $12 + 8 = \underline{\quad}$



4. $10 - 2 = \underline{\quad}$



5. $18 + 2 = \underline{\quad}$

