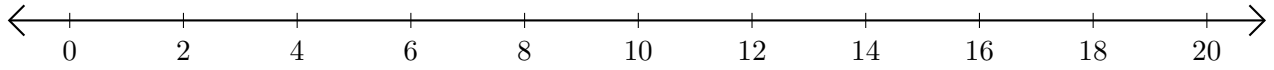


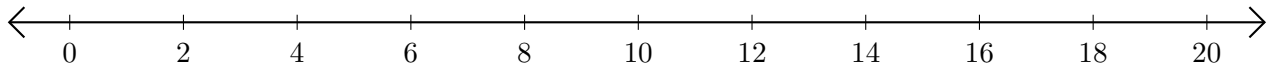
Opérations sur Une Droite Graduée (G)

Utilisez la droite graduée pour calculer chaque somme ou différence.

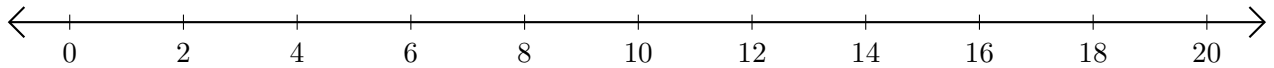
1. $10 + 8 = \underline{\quad}$



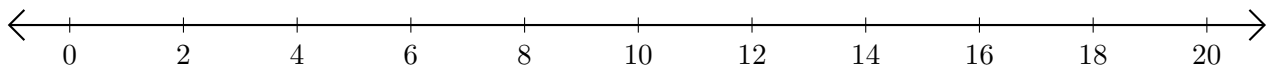
2. $14 - 4 = \underline{\quad}$



3. $12 + 2 = \underline{\quad}$



4. $20 - 8 = \underline{\quad}$



5. $20 - 14 = \underline{\quad}$

