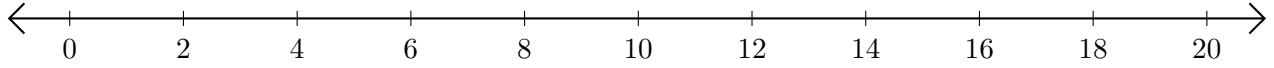


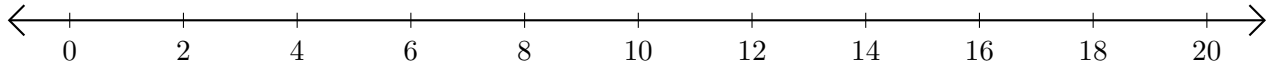
# Opérations sur Une Droite Graduée (F)

Utilisez la droite graduée pour calculer chaque somme ou différence.

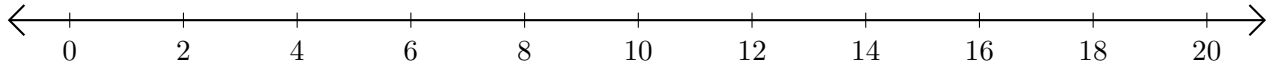
1.  $12 + 8 = \underline{\quad}$



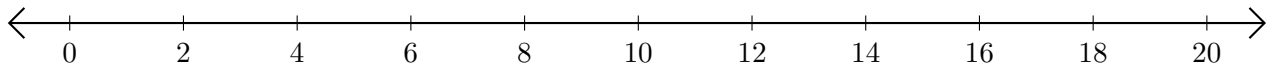
2.  $18 - 10 = \underline{\quad}$



3.  $4 + 16 = \underline{\quad}$



4.  $18 - 2 = \underline{\quad}$



5.  $8 + 4 = \underline{\quad}$

