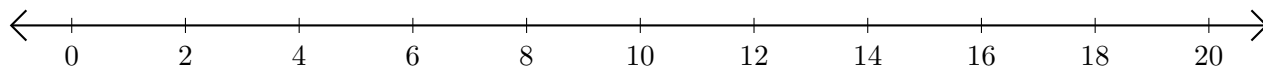


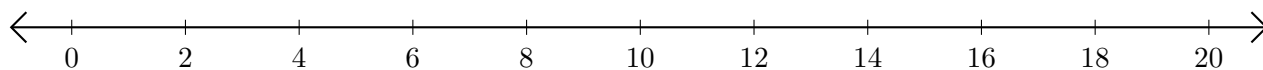
Opérations sur Une Droite Graduée (F)

Utilisez la droite graduée pour calculer chaque somme ou différence.

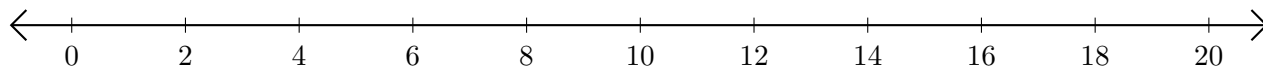
1. $12 + 8 = \underline{\quad}$



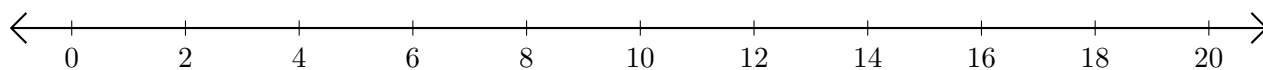
2. $18 - 10 = \underline{\quad}$



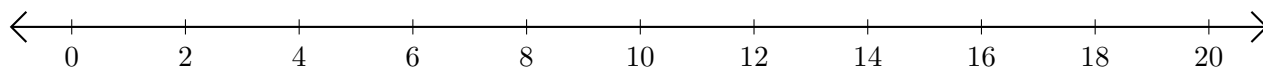
3. $4 + 16 = \underline{\quad}$



4. $18 - 2 = \underline{\quad}$



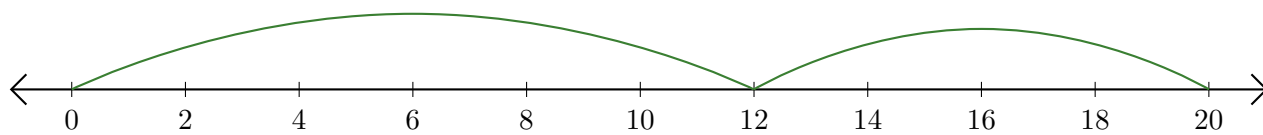
5. $8 + 4 = \underline{\quad}$



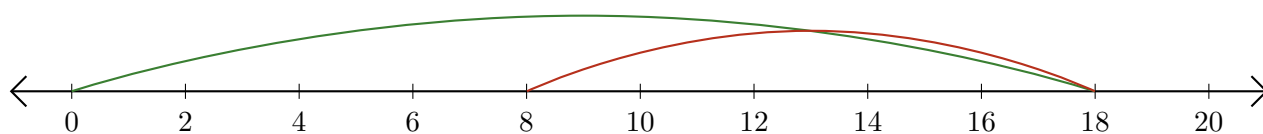
Opérations sur Une Droite Graduée (F) Réponses

Utilisez la droite graduée pour calculer chaque somme ou différence.

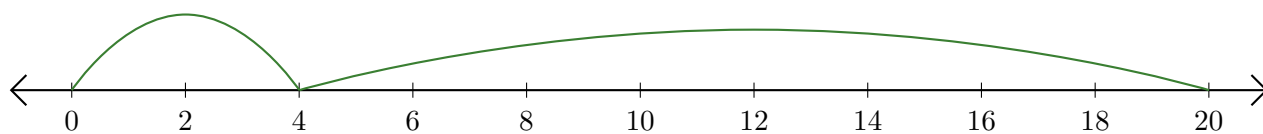
1. $12 + 8 = \underline{20}$



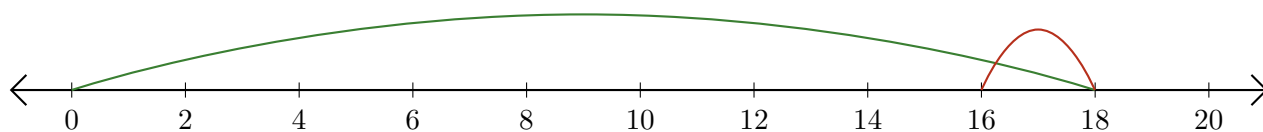
2. $18 - 10 = \underline{8}$



3. $4 + 16 = \underline{20}$



4. $18 - 2 = \underline{16}$



5. $8 + 4 = \underline{12}$

