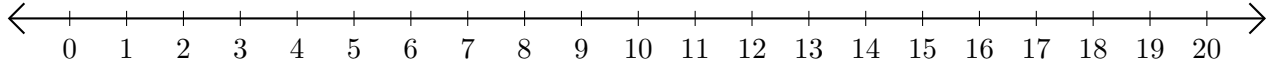


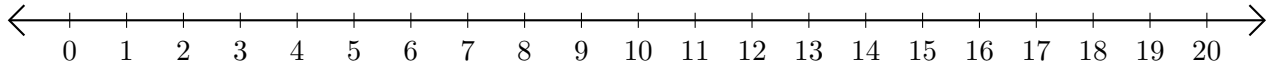
Opérations sur Une Droite Graduée (H)

Utilisez la droite graduée pour calculer chaque somme ou différence.

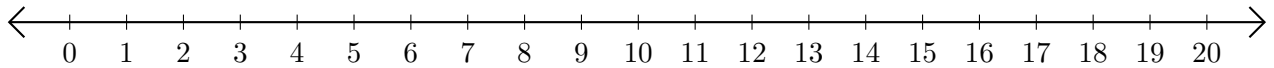
1. $11 + 4 = \underline{\quad}$



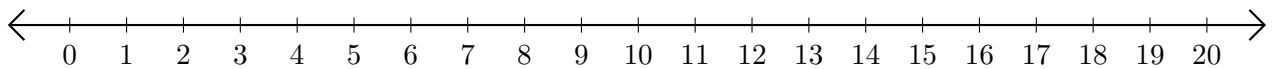
2. $20 - 19 = \underline{\quad}$



3. $5 + 8 = \underline{\quad}$



4. $9 - 1 = \underline{\quad}$



5. $13 + 2 = \underline{\quad}$

