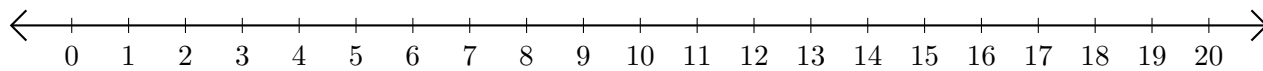


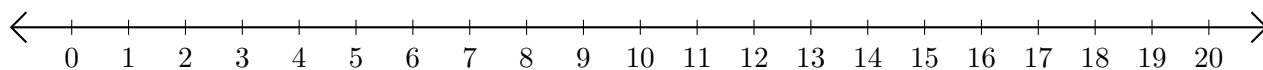
# Opérations sur Une Droite Graduée (F)

Utilisez la droite graduée pour calculer chaque somme ou différence.

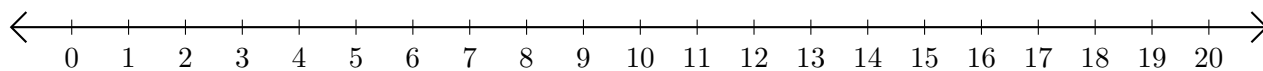
1.  $19 + 1 = \underline{\quad}$



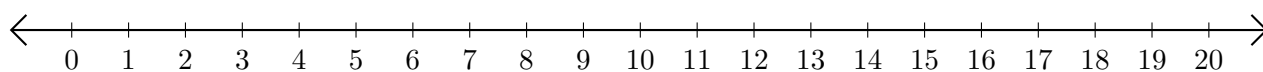
2.  $14 - 11 = \underline{\quad}$



3.  $2 + 13 = \underline{\quad}$



4.  $18 - 16 = \underline{\quad}$



5.  $1 + 19 = \underline{\quad}$

