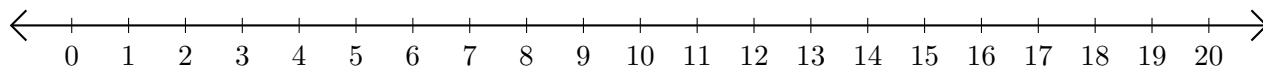


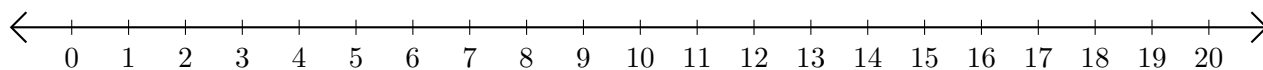
Opérations sur Une Droite Graduée (E)

Utilisez la droite graduée pour calculer chaque somme ou différence.

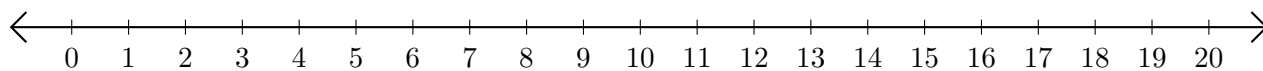
1. $11 + 9 = \underline{\quad}$



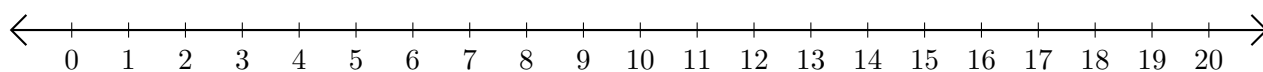
2. $14 - 10 = \underline{\quad}$



3. $3 + 8 = \underline{\quad}$



4. $19 - 15 = \underline{\quad}$



5. $20 - 18 = \underline{\quad}$

