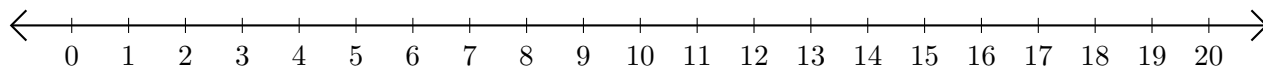


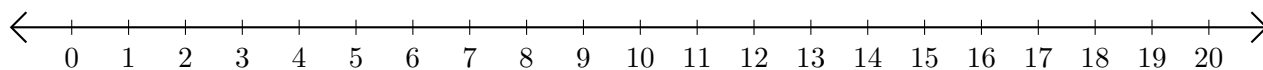
Opérations sur Une Droite Graduée (E)

Utilisez la droite graduée pour calculer chaque somme ou différence.

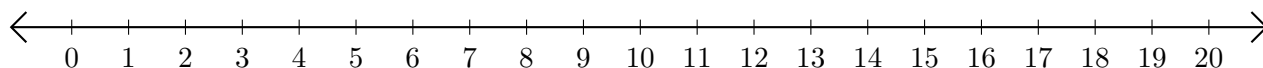
1. $11 + 9 = \underline{\quad}$



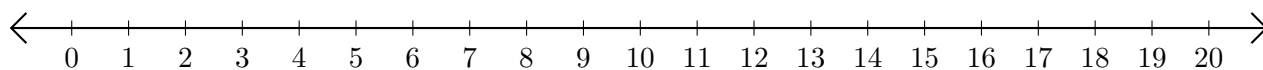
2. $14 - 10 = \underline{\quad}$



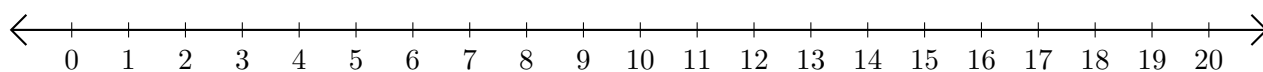
3. $3 + 8 = \underline{\quad}$



4. $19 - 15 = \underline{\quad}$



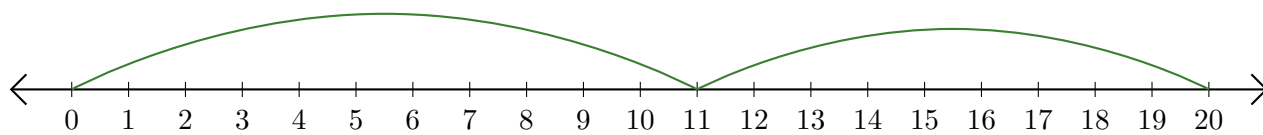
5. $20 - 18 = \underline{\quad}$



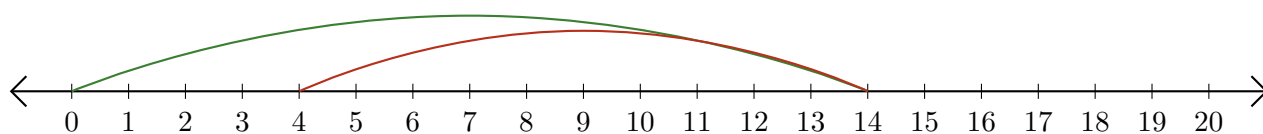
Opérations sur Une Droite Graduée (E) Réponses

Utilisez la droite graduée pour calculer chaque somme ou différence.

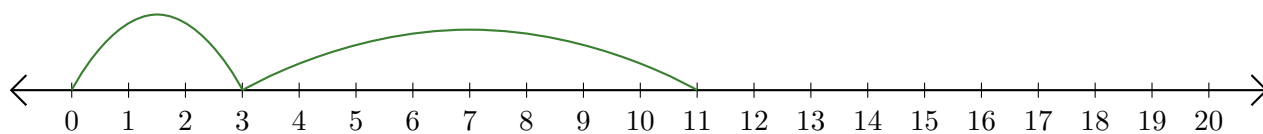
1. $11 + 9 = \underline{20}$



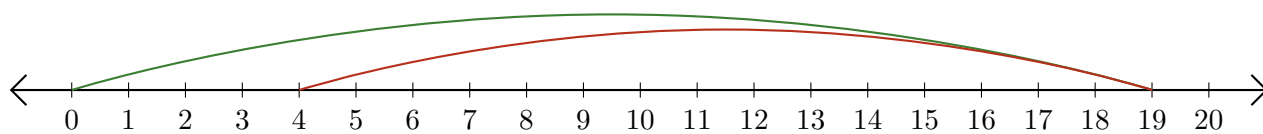
2. $14 - 10 = \underline{4}$



3. $3 + 8 = \underline{11}$



4. $19 - 15 = \underline{4}$



5. $20 - 18 = \underline{2}$

