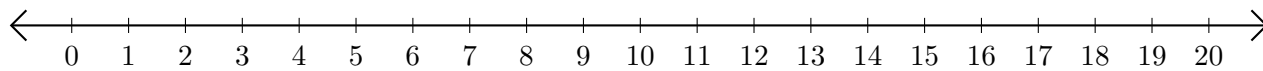


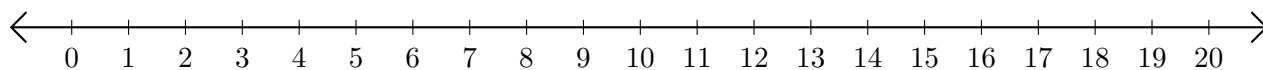
Opérations sur Une Droite Graduée (B)

Utilisez la droite graduée pour calculer chaque somme ou différence.

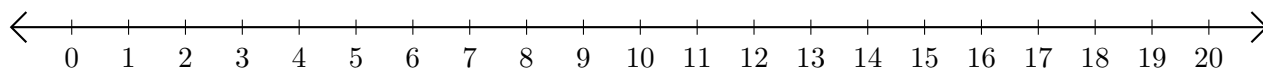
1. $1 + 19 = \underline{\quad}$



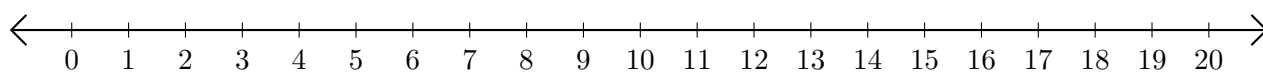
2. $20 - 18 = \underline{\quad}$



3. $13 + 2 = \underline{\quad}$



4. $16 - 4 = \underline{\quad}$



5. $14 + 6 = \underline{\quad}$

