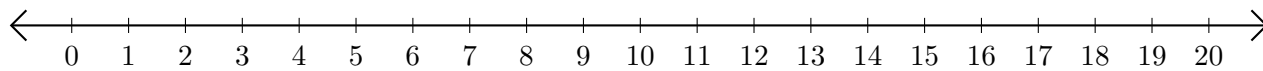


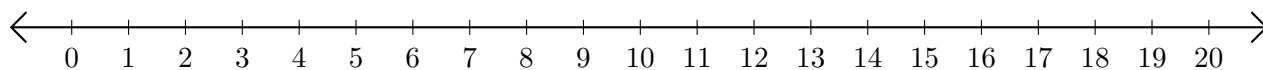
Opérations sur Une Droite Graduée (B)

Utilisez la droite graduée pour calculer chaque somme ou différence.

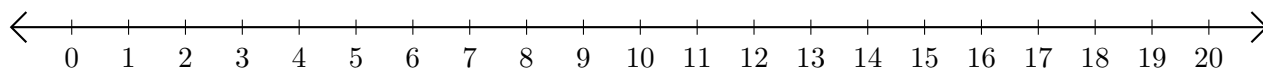
1. $1 + 19 = \underline{\quad}$



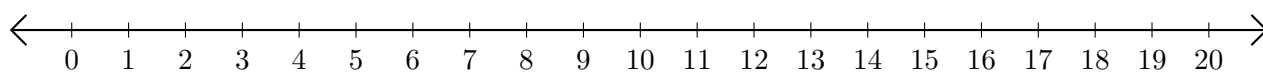
2. $20 - 18 = \underline{\quad}$



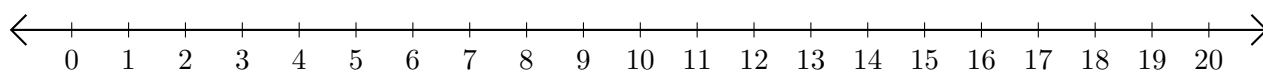
3. $13 + 2 = \underline{\quad}$



4. $16 - 4 = \underline{\quad}$



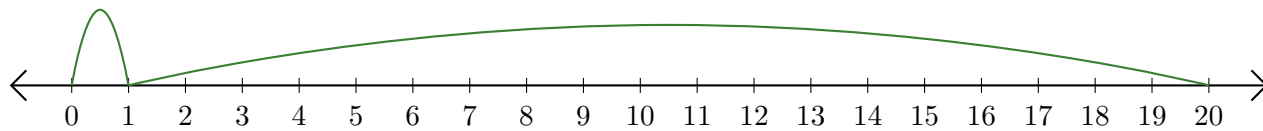
5. $14 + 6 = \underline{\quad}$



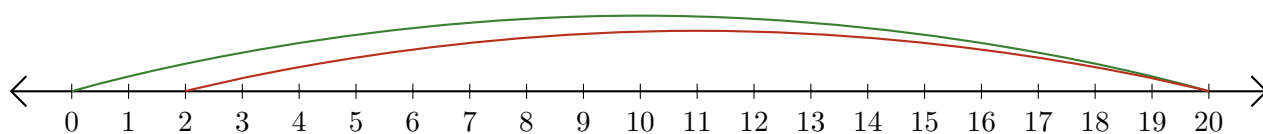
Opérations sur Une Droite Graduée (B) Réponses

Utilisez la droite graduée pour calculer chaque somme ou différence.

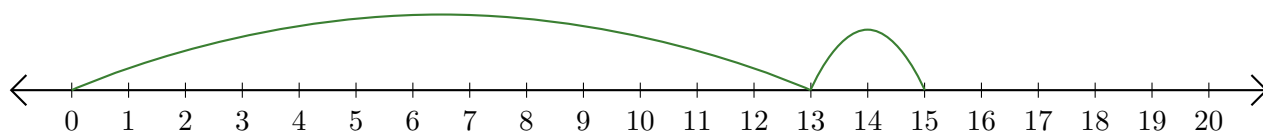
1. $1 + 19 = \underline{20}$



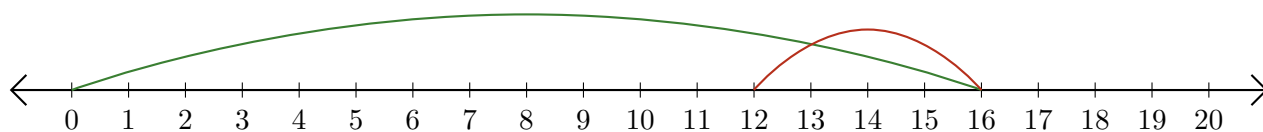
2. $20 - 18 = \underline{2}$



3. $13 + 2 = \underline{15}$



4. $16 - 4 = \underline{12}$



5. $14 + 6 = \underline{20}$

