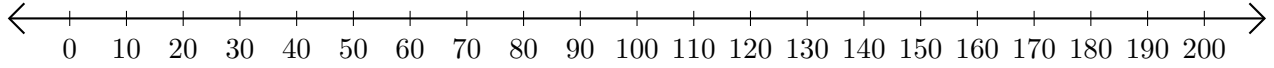


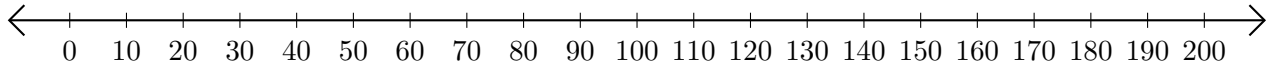
# Opérations sur Une Droite Graduée (I)

Utilisez la droite graduée pour calculer chaque somme ou différence.

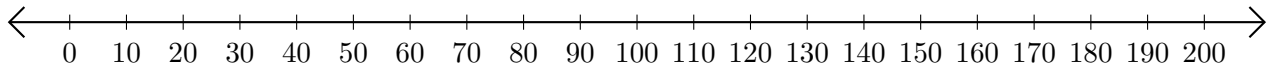
1.  $170 + 10 = \underline{\hspace{2cm}}$



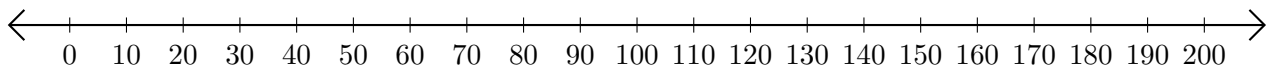
2.  $100 - 90 = \underline{\hspace{2cm}}$



3.  $110 + 90 = \underline{\hspace{2cm}}$



4.  $200 - 100 = \underline{\hspace{2cm}}$



5.  $180 + 10 = \underline{\hspace{2cm}}$

