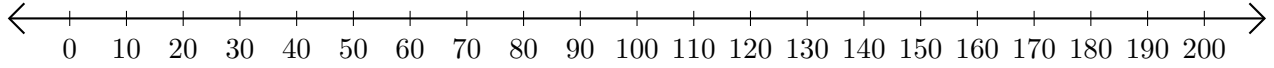


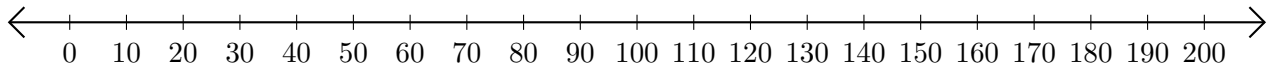
Opérations sur Une Droite Graduée (I)

Utilisez la droite graduée pour calculer chaque somme ou différence.

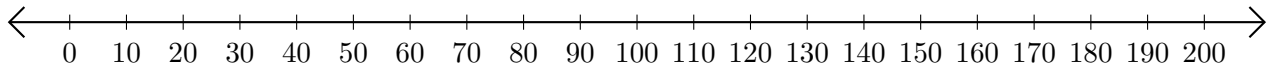
1. $170 + 10 = \underline{\hspace{2cm}}$



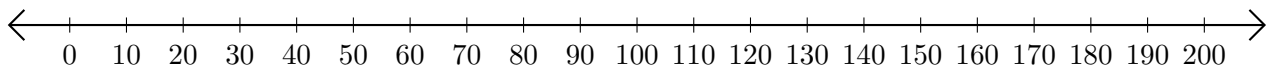
2. $100 - 90 = \underline{\hspace{2cm}}$



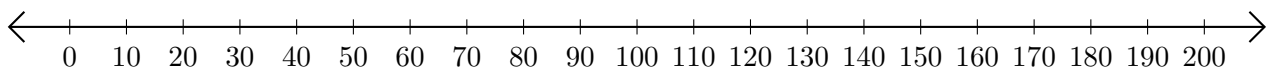
3. $110 + 90 = \underline{\hspace{2cm}}$



4. $200 - 100 = \underline{\hspace{2cm}}$



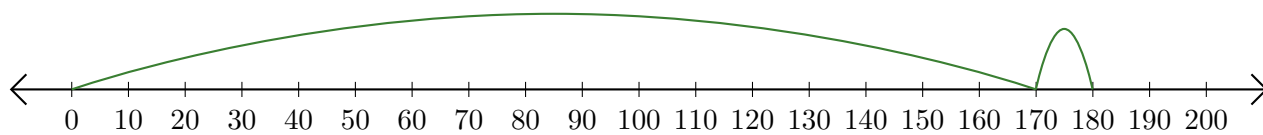
5. $180 + 10 = \underline{\hspace{2cm}}$



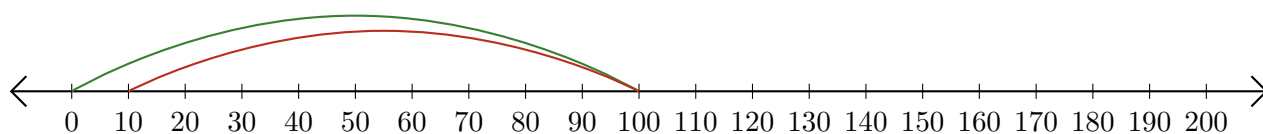
Opérations sur Une Droite Graduée (I) Réponses

Utilisez la droite graduée pour calculer chaque somme ou différence.

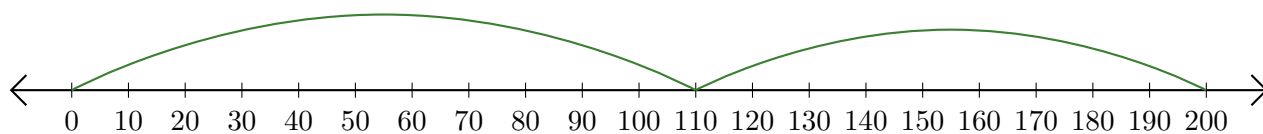
1. $170 + 10 = \underline{180}$



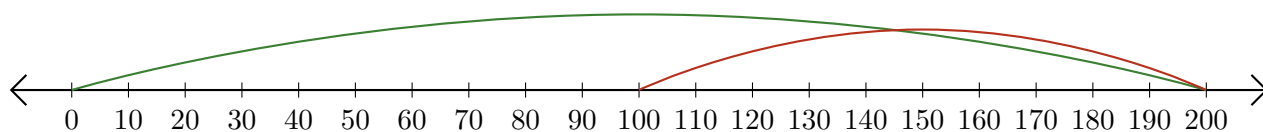
2. $100 - 90 = \underline{10}$



3. $110 + 90 = \underline{200}$



4. $200 - 100 = \underline{100}$



5. $180 + 10 = \underline{190}$

