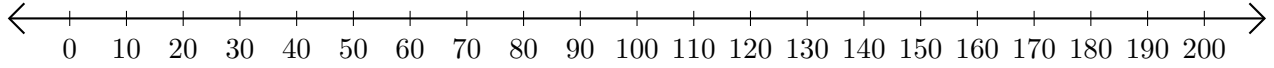


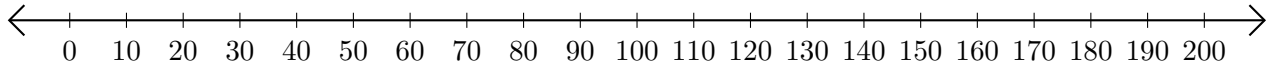
# Opérations sur Une Droite Graduée (E)

Utilisez la droite graduée pour calculer chaque somme ou différence.

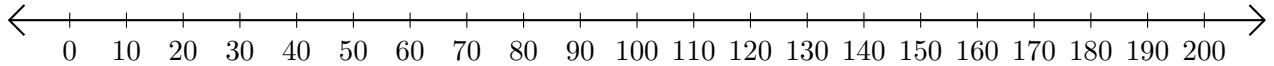
1.  $90 + 110 = \underline{\hspace{2cm}}$



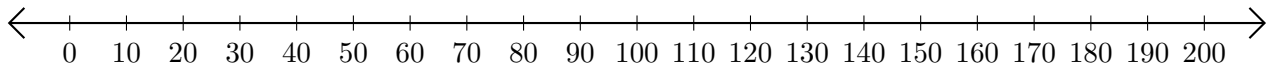
2.  $110 - 40 = \underline{\hspace{2cm}}$



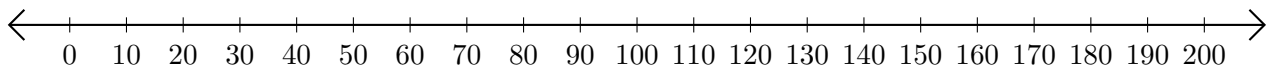
3.  $110 + 50 = \underline{\hspace{2cm}}$



4.  $200 - 120 = \underline{\hspace{2cm}}$



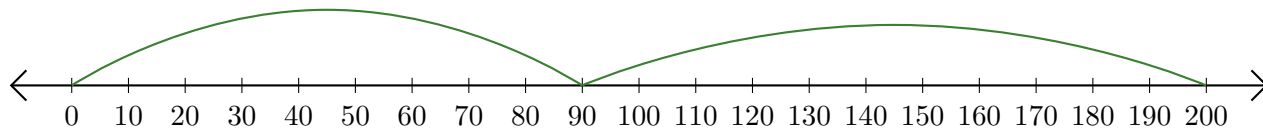
5.  $200 - 190 = \underline{\hspace{2cm}}$



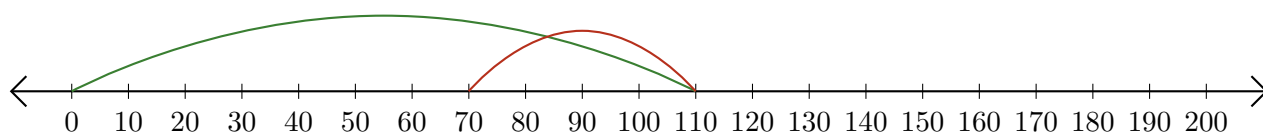
# Opérations sur Une Droite Graduée (E) Réponses

Utilisez la droite graduée pour calculer chaque somme ou différence.

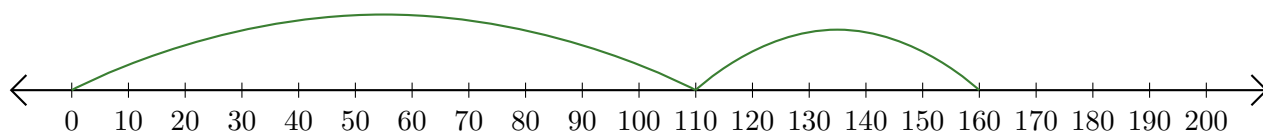
1.  $90 + 110 = \underline{200}$



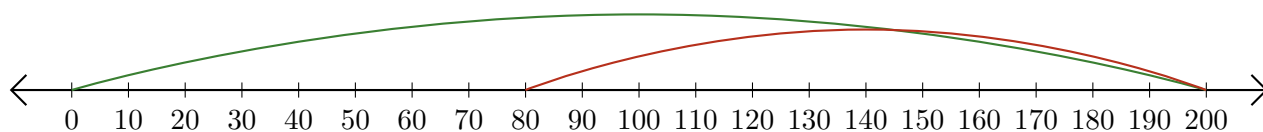
2.  $110 - 40 = \underline{70}$



3.  $110 + 50 = \underline{160}$



4.  $200 - 120 = \underline{80}$



5.  $200 - 190 = \underline{10}$

