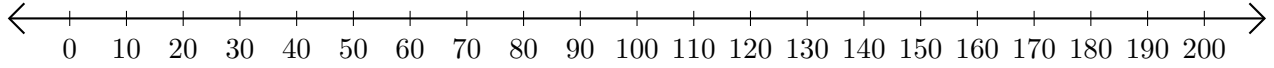


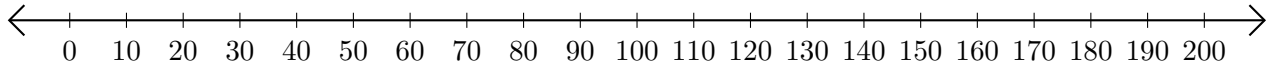
# Opérations sur Une Droite Graduée (D)

Utilisez la droite graduée pour calculer chaque somme ou différence.

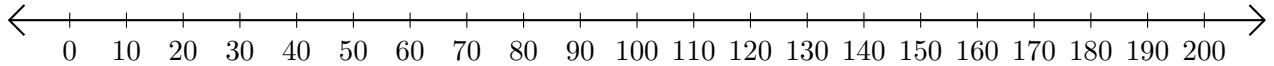
1.  $170 + 30 = \underline{\hspace{2cm}}$



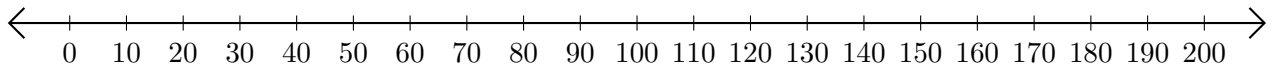
2.  $200 - 190 = \underline{\hspace{2cm}}$



3.  $70 + 10 = \underline{\hspace{2cm}}$



4.  $190 - 60 = \underline{\hspace{2cm}}$



5.  $110 + 30 = \underline{\hspace{2cm}}$

