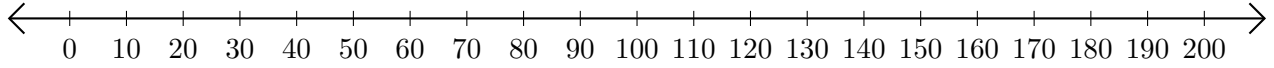


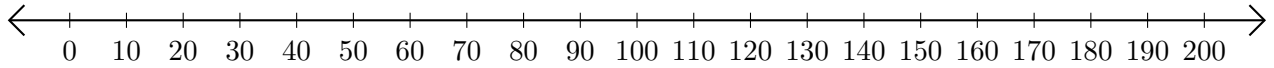
Opérations sur Une Droite Graduée (D)

Utilisez la droite graduée pour calculer chaque somme ou différence.

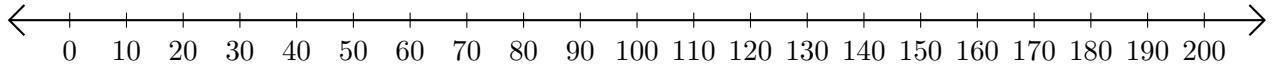
1. $170 + 30 = \underline{\hspace{2cm}}$



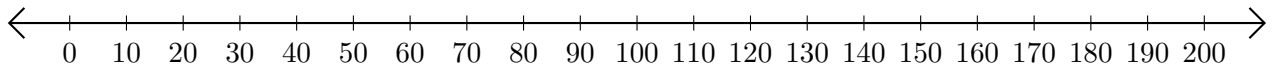
2. $200 - 190 = \underline{\hspace{2cm}}$



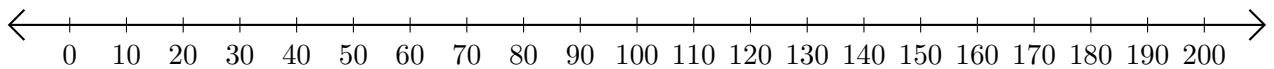
3. $70 + 10 = \underline{\hspace{2cm}}$



4. $190 - 60 = \underline{\hspace{2cm}}$



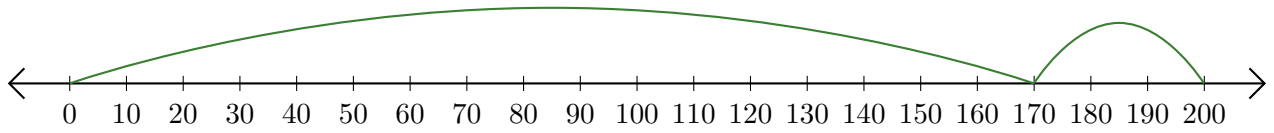
5. $110 + 30 = \underline{\hspace{2cm}}$



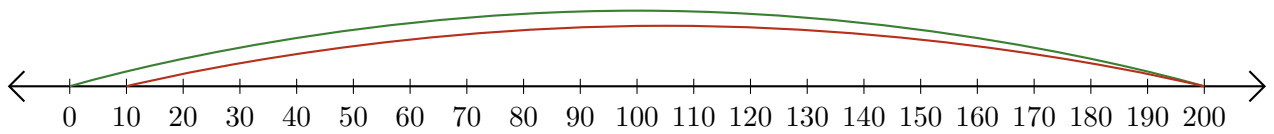
Opérations sur Une Droite Graduée (D) Réponses

Utilisez la droite graduée pour calculer chaque somme ou différence.


1. $170 + 30 = \underline{200}$



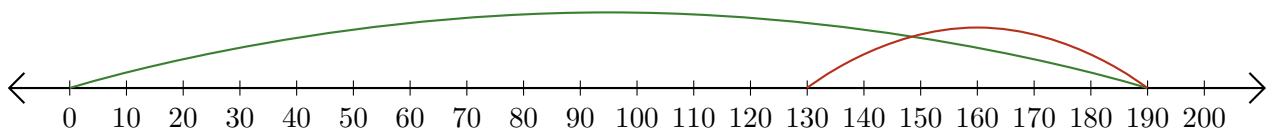
2. $200 - 190 = \underline{10}$



3. $70 + 10 = \underline{80}$



4. $190 - 60 = \underline{130}$



5. $110 + 30 = \underline{140}$

