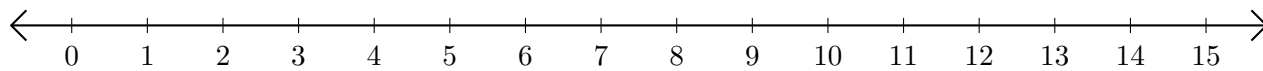


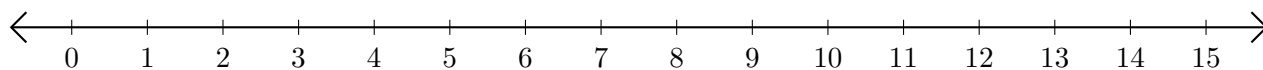
# Opérations sur Une Droite Graduée (J)

Utilisez la droite graduée pour calculer chaque somme ou différence.

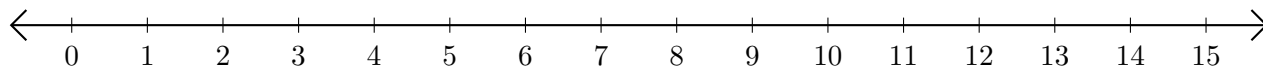
1.  $11 + 2 = \underline{\quad}$



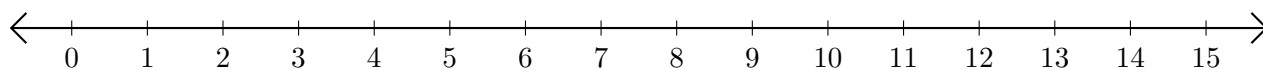
2.  $12 - 2 = \underline{\quad}$



3.  $10 + 3 = \underline{\quad}$



4.  $11 - 3 = \underline{\quad}$



5.  $8 + 2 = \underline{\quad}$

