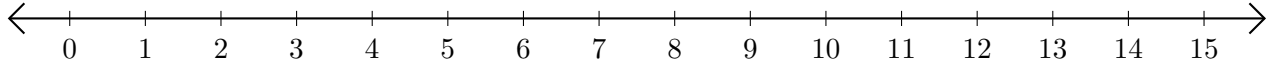


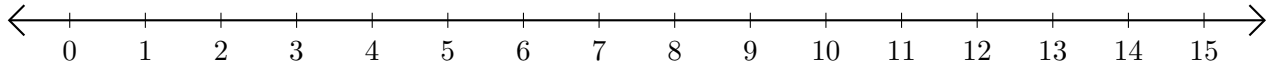
Opérations sur Une Droite Graduée (I)

Utilisez la droite graduée pour calculer chaque somme ou différence.

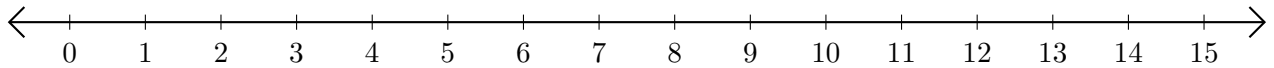
1. $5 + 1 = \underline{\quad}$



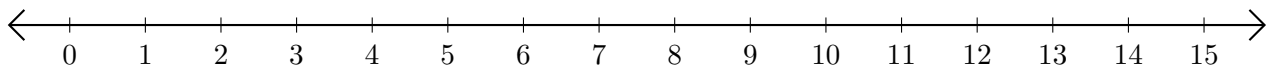
2. $10 - 1 = \underline{\quad}$



3. $3 + 3 = \underline{\quad}$



4. $13 - 10 = \underline{\quad}$



5. $4 + 4 = \underline{\quad}$

