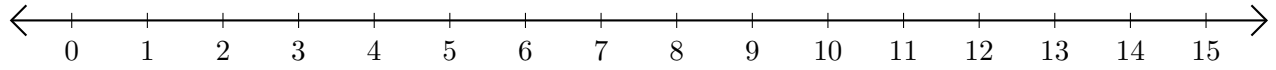


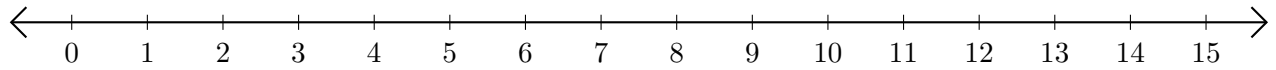
# Opérations sur Une Droite Graduée (G)

Utilisez la droite graduée pour calculer chaque somme ou différence.

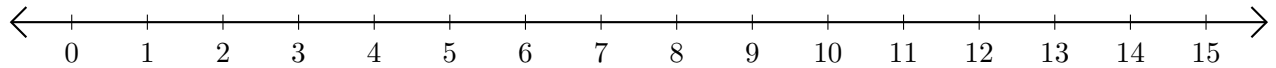
1.  $10 + 2 = \underline{\quad}$



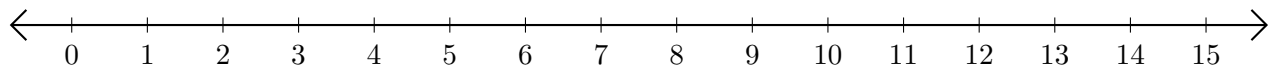
2.  $13 - 11 = \underline{\quad}$



3.  $8 + 6 = \underline{\quad}$



4.  $13 - 6 = \underline{\quad}$



5.  $12 - 2 = \underline{\quad}$

