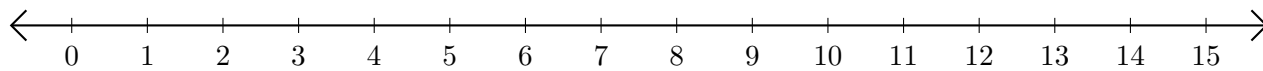


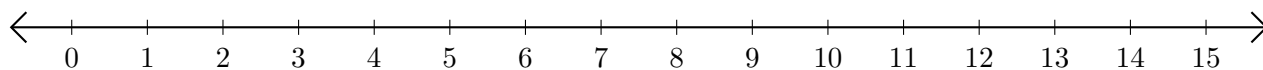
# Opérations sur Une Droite Graduée (F)

Utilisez la droite graduée pour calculer chaque somme ou différence.

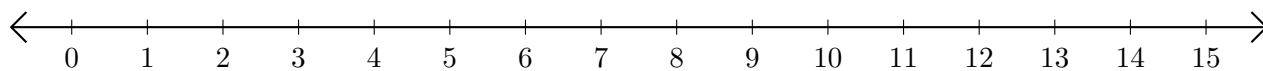
1.  $3 + 5 = \underline{\quad}$



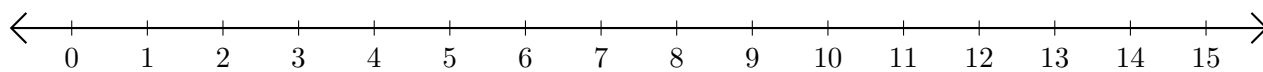
2.  $14 - 13 = \underline{\quad}$



3.  $4 + 8 = \underline{\quad}$



4.  $11 - 8 = \underline{\quad}$



5.  $3 - 1 = \underline{\quad}$

