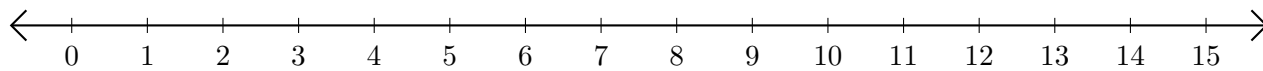


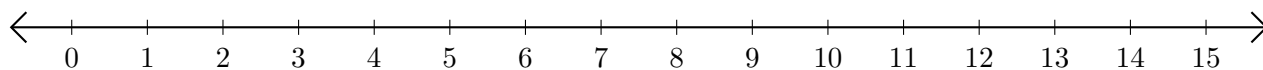
## Opérations sur Une Droite Graduée (E)

Utilisez la droite graduée pour calculer chaque somme ou différence.

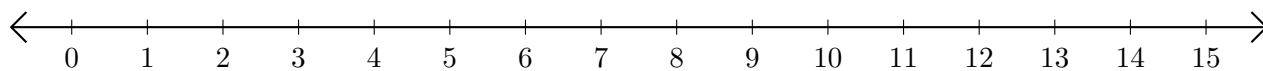
1.  $5 + 7 = \underline{\quad}$



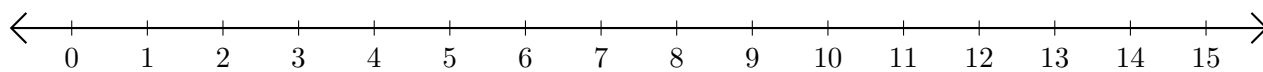
2.  $8 - 1 = \underline{\quad}$



3.  $2 + 10 = \underline{\quad}$



4.  $15 - 14 = \underline{\quad}$



5.  $11 + 1 = \underline{\quad}$

