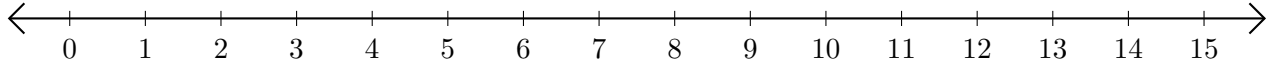


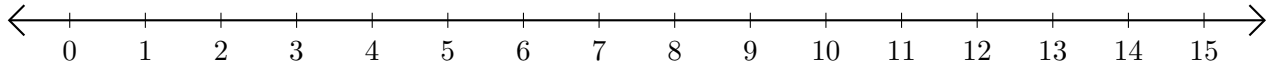
Opérations sur Une Droite Graduée (D)

Utilisez la droite graduée pour calculer chaque somme ou différence.

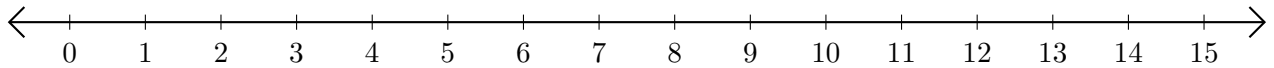
1. $7 + 8 = \underline{\quad}$



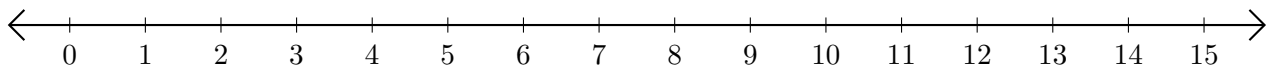
2. $15 - 12 = \underline{\quad}$



3. $1 + 7 = \underline{\quad}$



4. $7 - 3 = \underline{\quad}$



5. $5 - 2 = \underline{\quad}$

