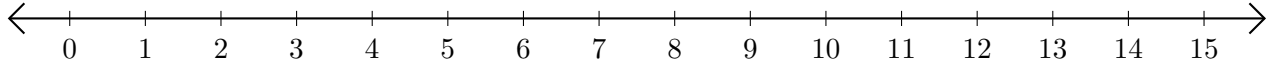


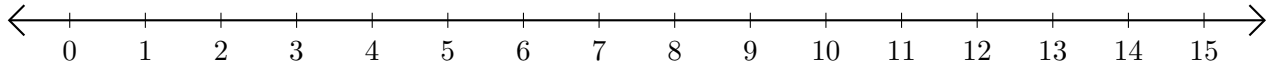
# Opérations sur Une Droite Graduée (C)

Utilisez la droite graduée pour calculer chaque somme ou différence.

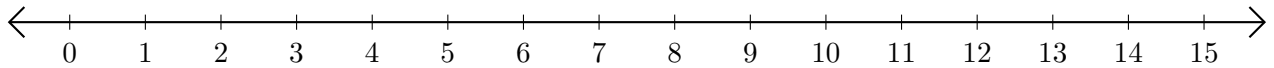
1.  $7 + 1 = \underline{\quad}$



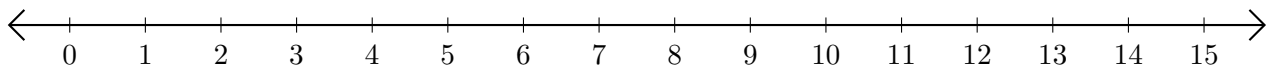
2.  $11 - 8 = \underline{\quad}$



3.  $4 + 11 = \underline{\quad}$



4.  $13 - 5 = \underline{\quad}$



5.  $8 - 6 = \underline{\quad}$

