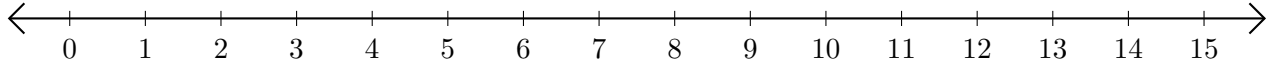


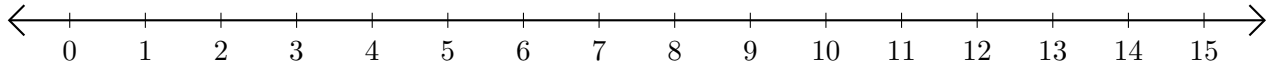
Opérations sur Une Droite Graduée (A)

Utilisez la droite graduée pour calculer chaque somme ou différence.

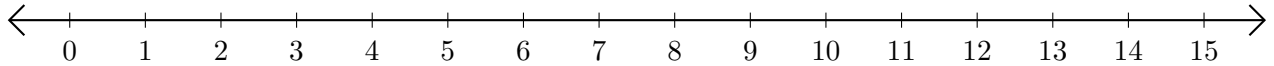
1. $14 + 1 = \underline{\quad}$



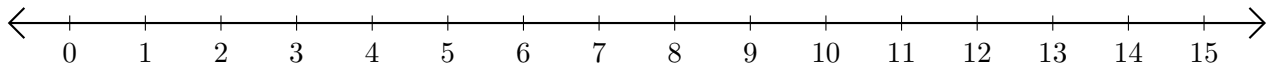
2. $13 - 12 = \underline{\quad}$



3. $7 + 2 = \underline{\quad}$



4. $13 - 10 = \underline{\quad}$



5. $9 + 3 = \underline{\quad}$

