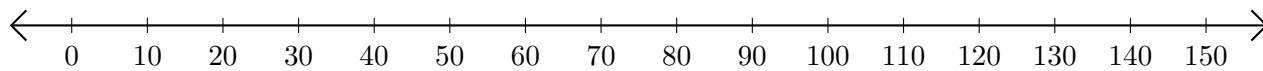


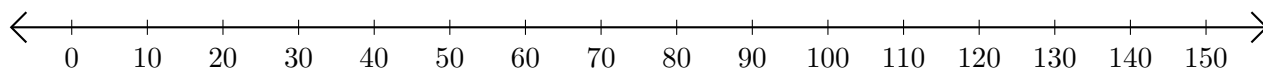
## Opérations sur Une Droite Graduée (F)

Utilisez la droite graduée pour calculer chaque somme ou différence.

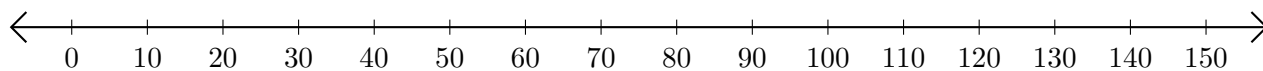
1.  $110 + 30 = \underline{\hspace{2cm}}$



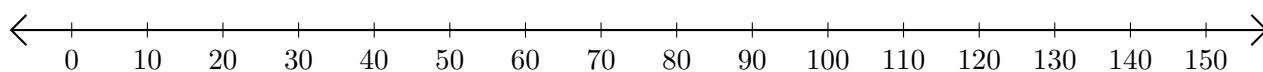
2.  $70 - 10 = \underline{\hspace{2cm}}$



3.  $40 + 20 = \underline{\hspace{2cm}}$



4.  $90 - 70 = \underline{\hspace{2cm}}$



5.  $50 + 70 = \underline{\hspace{2cm}}$

