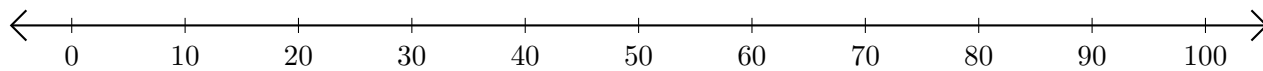


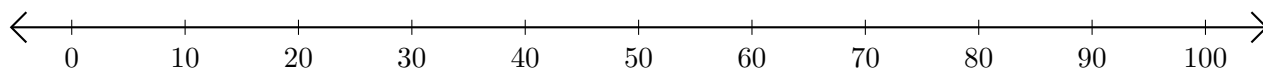
Opérations sur Une Droite Graduée (F)

Utilisez la droite graduée pour calculer chaque somme ou différence.

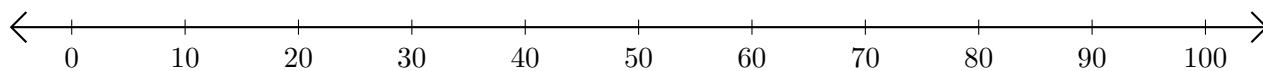
1. $80 + 10 = \underline{\hspace{2cm}}$



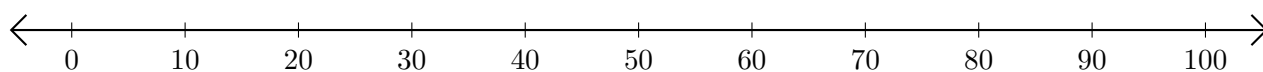
2. $80 - 20 = \underline{\hspace{2cm}}$



3. $70 + 20 = \underline{\hspace{2cm}}$



4. $70 - 50 = \underline{\hspace{2cm}}$



5. $90 + 10 = \underline{\hspace{2cm}}$

