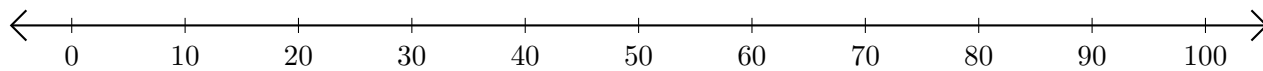


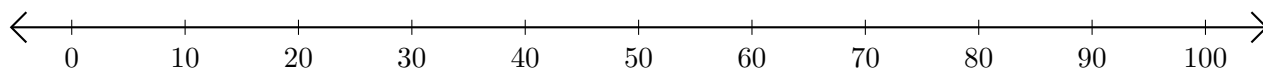
Opérations sur Une Droite Graduée (F)

Utilisez la droite graduée pour calculer chaque somme ou différence.

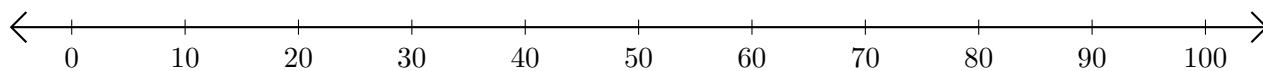
1. $80 + 10 = \underline{\quad}$



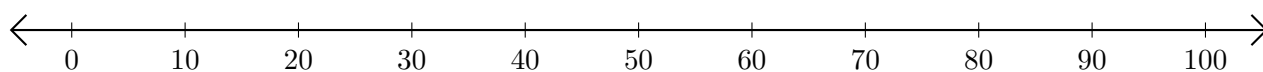
2. $80 - 20 = \underline{\quad}$



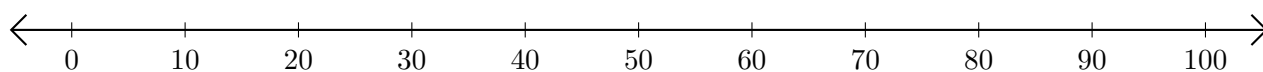
3. $70 + 20 = \underline{\quad}$



4. $70 - 50 = \underline{\quad}$



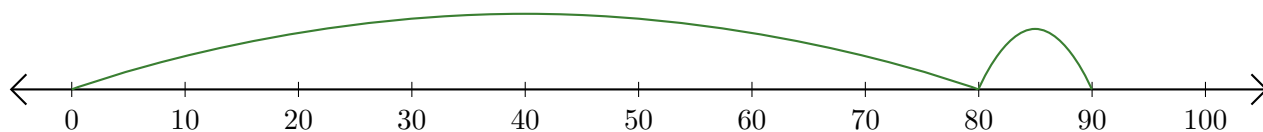
5. $90 + 10 = \underline{\quad}$



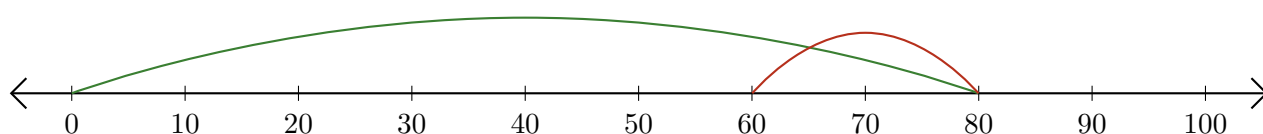
Opérations sur Une Droite Graduée (F) Réponses

Utilisez la droite graduée pour calculer chaque somme ou différence.

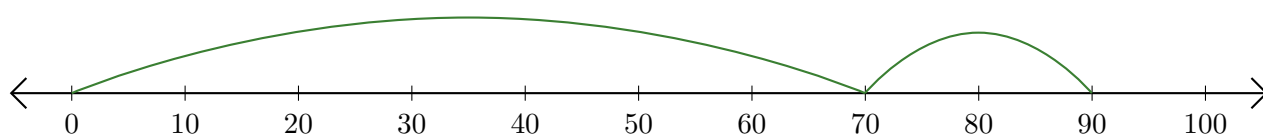
1. $80 + 10 = \underline{90}$



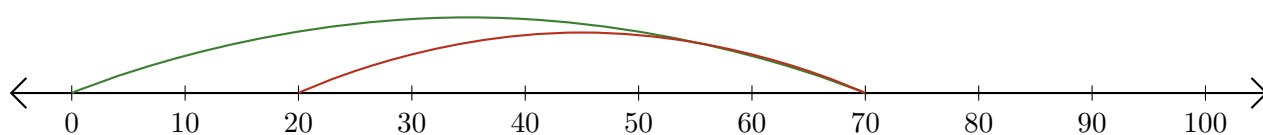
2. $80 - 20 = \underline{60}$



3. $70 + 20 = \underline{90}$



4. $70 - 50 = \underline{20}$



5. $90 + 10 = \underline{100}$

