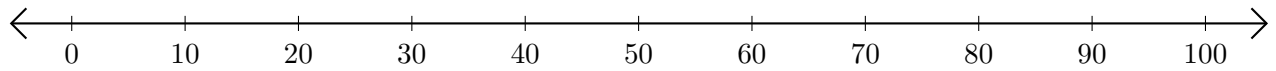


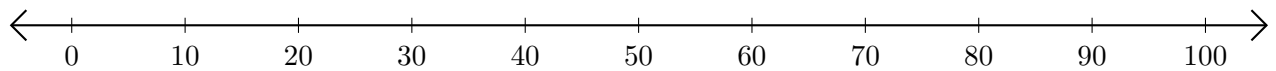
Opérations sur Une Droite Graduée (B)

Utilisez la droite graduée pour calculer chaque somme ou différence.

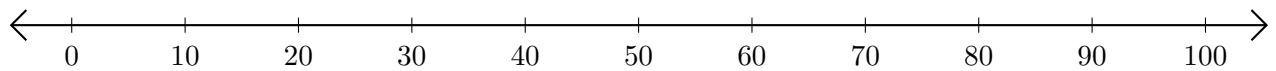
1. $60 + 10 = \underline{\quad}$



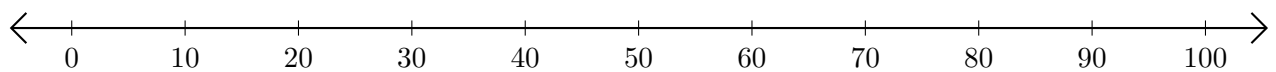
2. $80 - 30 = \underline{\quad}$



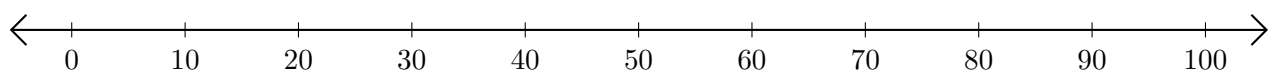
3. $50 + 40 = \underline{\quad}$



4. $90 - 40 = \underline{\quad}$



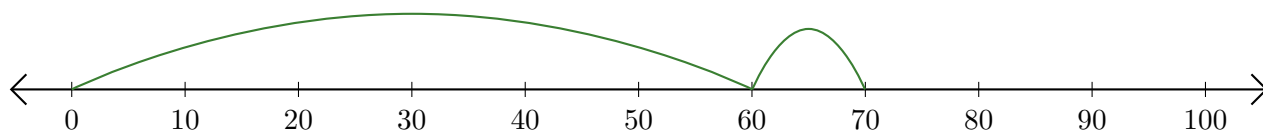
5. $100 - 90 = \underline{\quad}$



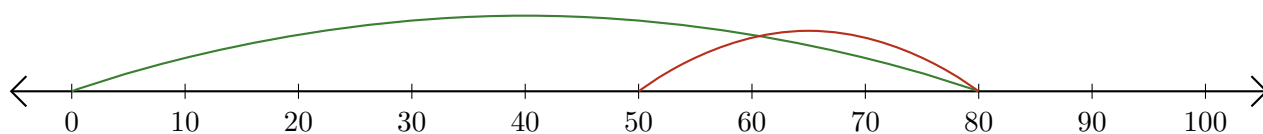
Opérations sur Une Droite Graduée (B) Réponses

Utilisez la droite graduée pour calculer chaque somme ou différence.

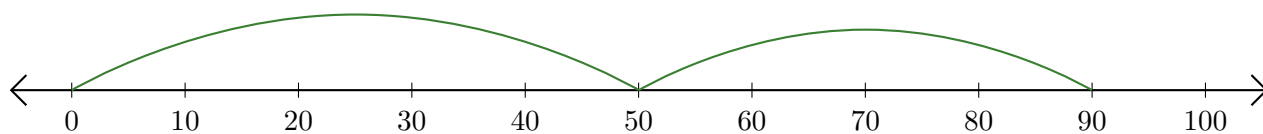
1. $60 + 10 = \underline{70}$



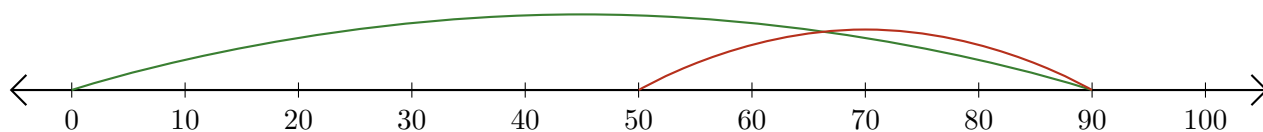
2. $80 - 30 = \underline{50}$



3. $50 + 40 = \underline{90}$



4. $90 - 40 = \underline{50}$



5. $100 - 90 = \underline{10}$

