


# Comptage par Bonds de 100 (A)

Remplissez les champs vides.



100




\_\_\_\_\_



\_\_\_\_\_




\_\_\_\_\_



\_\_\_\_\_



\_\_\_\_\_




\_\_\_\_\_



\_\_\_\_\_



900



\_\_\_\_\_



\_\_\_\_\_



\_\_\_\_\_



\_\_\_\_\_



1400



\_\_\_\_\_



\_\_\_\_\_



\_\_\_\_\_



\_\_\_\_\_



\_\_\_\_\_



2000



\_\_\_\_\_



\_\_\_\_\_



\_\_\_\_\_



2400



\_\_\_\_\_



\_\_\_\_\_



\_\_\_\_\_



2800



\_\_\_\_\_



\_\_\_\_\_