

Facteurs Premiers (I)

Utilisez un diagramme à branches pour trouver les facteurs premiers des nombres suivants.

56

154

172

122

190

48

116

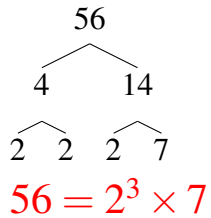
72

112

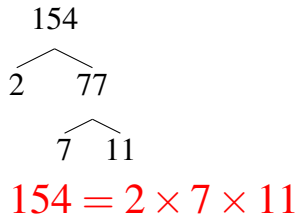
Facteurs Premiers (I) Solutions

Utilisez un diagramme à branches pour trouver les facteurs premiers des nombres suivants.

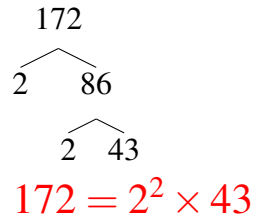
56



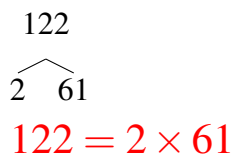
154



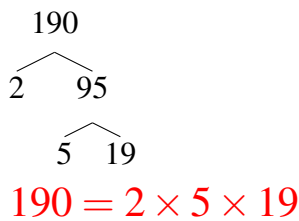
172



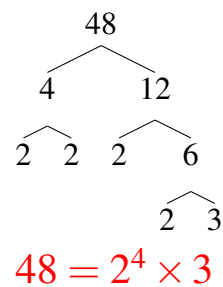
122



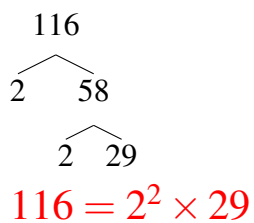
190



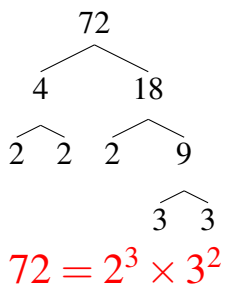
48



116



72



112

