




Addition de Coeurs Doux (9)

Quelle est la valeur de chaque doux coeur?

116	+		=	772		+	462	=	670
109	+		=	726		+	642	=	1248
474	+		=	1085		+	766	=	1356
150	+		=	781		+	780	=	1353
281	+		=	707		+	442	=	662
110	+		=	922		+	310	=	1308
676	+		=	1481		+	100	=	499
212	+		=	932		+	765	=	1001
422	+		=	991		+	848	=	1432
917	+		=	1579		+	654	=	1538

Joyeuse Saint Valentin de la part Mathslibres.com!

Addition de Coeurs Doux (9) Réponses

Quelle est la valeur de chaque doux coeur?

$116 + 656 = 772$

$208 + 462 = 670$

$109 + 617 = 726$

$606 + 642 = 1248$

$474 + 611 = 1085$

$590 + 766 = 1356$

$150 + 631 = 781$

$573 + 780 = 1353$

$281 + 426 = 707$

$220 + 442 = 662$

$110 + 812 = 922$

$998 + 310 = 1308$

$676 + 805 = 1481$

$399 + 100 = 499$

$212 + 720 = 932$

$236 + 765 = 1001$

$422 + 569 = 991$

$584 + 848 = 1432$

$917 + 662 = 1579$

$884 + 654 = 1538$

Joyeuse Saint Valentin de la part Mathslibres.com!