


QU'EST-CE QUE LE CADEAU? (G)

Quel nombre se trouve dans chaque cadeau?

$48 \div 6 =$ 

$6 \div 3 =$ 

$6 \div 3 =$ 

$24 \div 8 =$ 

$56 \div 7 =$ 

$6 \div$  $= 2$

$12 \div$  $= 4$

$21 \div$  $= 3$

$30 \div$  $= 6$


$10 \div$  $= 5$

$$  $\div 3 = 2$


$$  $\div 2 = 8$

$$  $\div 5 = 8$

$$  $\div 3 = 5$

$$  $\div 4 = 6$

$6 \div 2 =$ 

$40 \div 8 =$ 

$15 \div 5 =$ 

$40 \div 8 =$ 

$8 \div 2 =$ 

$24 \div$  $= 4$

$6 \div$  $= 2$

$48 \div$  $= 8$

$4 \div$  $= 2$


$30 \div$  $= 6$

$$  $\div 2 = 3$

$$  $\div 4 = 8$


$$  $\div 6 = 8$


$$  $\div 5 = 5$

$$  $\div 2 = 2$

$32 \div 4 =$ 

$12 \div 2 =$ 

$12 \div 3 =$ 

$6 \div 3 =$ 

$64 \div 8 =$ 

$16 \div$  $= 4$


$12 \div$  $= 3$

$30 \div$  $= 5$


$28 \div$  $= 7$

$4 \div$  $= 2$

$$  $\div 4 = 8$

$$  $\div 5 = 8$

$$  $\div 8 = 6$

$$  $\div 2 = 6$

$$  $\div 4 = 6$

QU'EST-CE QUE LE CADEAU? (G) SOLUTIONS

Quel nombre se trouve dans chaque cadeau?

$48 \div 6 = 8$	$6 \div 2 = 3$	$32 \div 4 = 8$
$6 \div 3 = 2$	$40 \div 8 = 5$	$12 \div 2 = 6$
$6 \div 3 = 2$	$15 \div 5 = 3$	$12 \div 3 = 4$
$24 \div 8 = 3$	$40 \div 8 = 5$	$6 \div 3 = 2$
$56 \div 7 = 8$	$8 \div 2 = 4$	$64 \div 8 = 8$
$6 \div 3 = 2$	$24 \div 6 = 4$	$16 \div 4 = 4$
$12 \div 3 = 4$	$6 \div 3 = 2$	$12 \div 4 = 3$
$21 \div 7 = 3$	$48 \div 6 = 8$	$30 \div 6 = 5$
$30 \div 5 = 6$	$4 \div 2 = 2$	$28 \div 4 = 7$
$10 \div 2 = 5$	$30 \div 5 = 6$	$4 \div 2 = 2$
$6 \div 3 = 2$	$6 \div 2 = 3$	$32 \div 4 = 8$
$16 \div 2 = 8$	$32 \div 4 = 8$	$40 \div 5 = 8$
$40 \div 5 = 8$	$48 \div 6 = 8$	$48 \div 8 = 6$
$15 \div 3 = 5$	$25 \div 5 = 5$	$12 \div 2 = 6$
$24 \div 4 = 6$	$4 \div 2 = 2$	$24 \div 4 = 6$