


























# QU'EST-CE QUE LE CADEAU? (A)

Quel nombre se trouve dans chaque cadeau?

|  |  |  |
|--|--|--|
| $4 \div 2 = $       | $14 \div 7 = $      | $35 \div 7 = $      |
| $10 \div 5 = $      | $18 \div 3 = $      | $10 \div 5 = $      |
| $18 \div 6 = $      | $8 \div 2 = $       | $20 \div 5 = $      |
| $25 \div 5 = $      | $8 \div 4 = $       | $12 \div 3 = $      |
| $18 \div 6 = $      | $10 \div 2 = $      | $20 \div 4 = $      |
| $35 \div $  $= 5$  | $12 \div $  $= 2$  | $21 \div $  $= 3$  |
| $20 \div $  $= 5$ | $8 \div $  $= 4$  | $10 \div $  $= 2$ |
| $36 \div $  $= 6$ | $35 \div $  $= 7$ | $12 \div $  $= 6$ |
| $30 \div $  $= 5$ | $30 \div $  $= 5$ | $12 \div $  $= 4$ |
| $12 \div $  $= 3$ | $6 \div $  $= 2$  | $16 \div $  $= 4$ |
|  $\div 5 = 3$     |  $\div 2 = 2$     |  $\div 6 = 2$     |
|  $\div 6 = 5$     |  $\div 6 = 2$     |  $\div 6 = 5$     |
|  $\div 2 = 2$     |  $\div 4 = 7$     |  $\div 3 = 4$     |
|  $\div 3 = 4$     |  $\div 2 = 6$     |  $\div 3 = 3$     |
|  $\div 7 = 2$     |  $\div 4 = 5$     |  $\div 6 = 4$     |