














































## QU'EST-CE QUE LE CADEAU? (C)

Quel nombre se trouve dans chaque cadeau?

3 + 7 = 	6 + 9 = 	4 + 8 = 
3 + 5 = 	2 + 5 = 	8 + 9 = 
2 + 5 = 	2 + 8 = 	6 + 7 = 
5 + 8 = 	9 + 8 = 	8 + 2 = 
2 + 9 = 	6 + 2 = 	9 + 8 = 
2 +  = 5	2 +  = 5	6 +  = 8
9 +  = 17	2 +  = 11	9 +  = 14
9 +  = 16	7 +  = 9	4 +  = 6
6 +  = 11	6 +  = 14	5 +  = 12
7 +  = 10	8 +  = 16	3 +  = 11
 + 7 = 16	 + 9 = 14	 + 4 = 6
 + 2 = 4	 + 4 = 10	 + 9 = 18
 + 6 = 12	 + 3 = 12	 + 9 = 14
 + 9 = 15	 + 7 = 13	 + 6 = 14
 + 7 = 16	 + 4 = 9	 + 6 = 14

# QU'EST-CE QUE LE CADEAU? (C) SOLUTIONS

Quel nombre se trouve dans chaque cadeau?

$3 + 7 = 10$

$6 + 9 = 15$

$4 + 8 = 12$

$3 + 5 = 8$

$2 + 5 = 7$

$8 + 9 = 17$

$2 + 5 = 7$

$2 + 8 = 10$

$6 + 7 = 13$

$5 + 8 = 13$

$9 + 8 = 17$

$8 + 2 = 10$

$2 + 9 = 11$

$6 + 2 = 8$

$9 + 8 = 17$

$2 + 3 = 5$

$2 + 3 = 5$

$6 + 2 = 8$

$9 + 8 = 17$

$2 + 9 = 11$

$9 + 5 = 14$

$9 + 7 = 16$

$7 + 2 = 9$

$4 + 2 = 6$

$6 + 5 = 11$

$6 + 8 = 14$

$5 + 7 = 12$

$7 + 3 = 10$

$8 + 8 = 16$

$3 + 8 = 11$

$9 + 7 = 16$

$5 + 9 = 14$

$2 + 4 = 6$

$2 + 2 = 4$

$6 + 4 = 10$

$9 + 9 = 18$

$6 + 6 = 12$

$9 + 3 = 12$

$5 + 9 = 14$

$6 + 9 = 15$

$6 + 7 = 13$

$8 + 6 = 14$

$9 + 7 = 16$

$5 + 4 = 9$

$8 + 6 = 14$