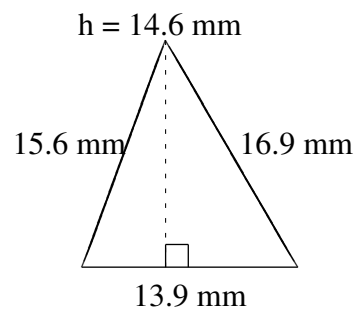
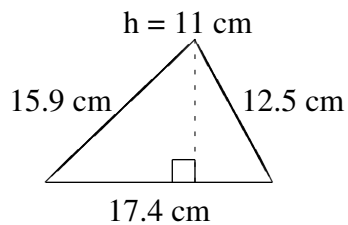
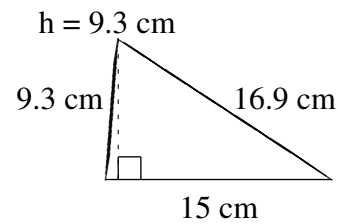
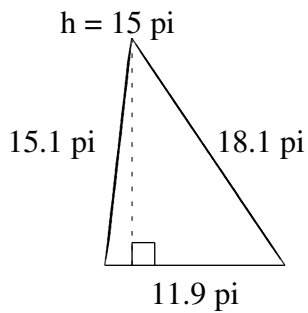
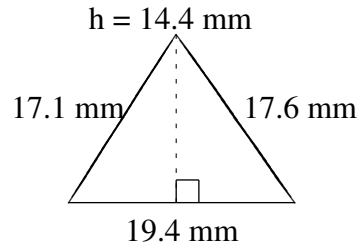
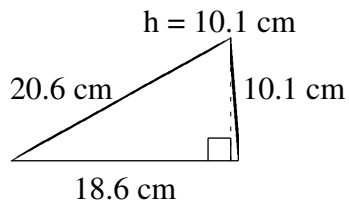


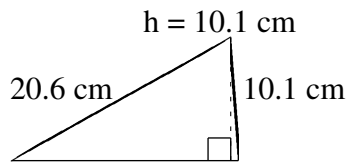
Aire et Périmètre de Triangles (J)

Trouvez l'aire et le périmètre de chaque triangle.

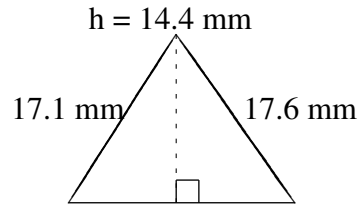


Aire et Périmètre de Triangles (J) Solutions

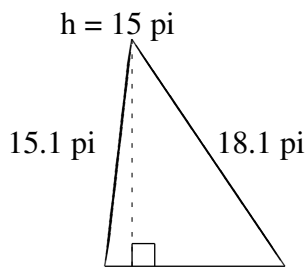
Trouvez l'aire et le périmètre de chaque triangle.



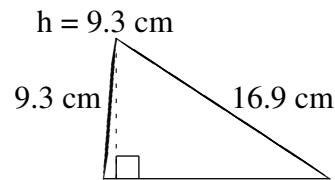
$$A = 93.93 \text{ cm}^2$$
$$P = 49.3 \text{ cm}$$



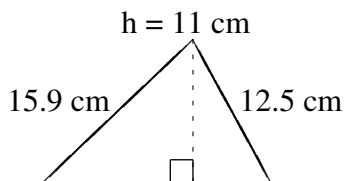
$$A = 139.68 \text{ mm}^2$$
$$P = 54.1 \text{ mm}$$



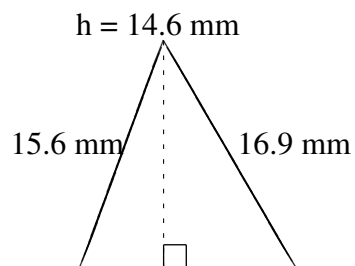
$$A = 89.25 \text{ pi}^2$$
$$P = 45.1 \text{ pi}$$



$$A = 69.75 \text{ cm}^2$$
$$P = 41.2 \text{ cm}$$



$$A = 95.7 \text{ cm}^2$$
$$P = 45.8 \text{ cm}$$



$$A = 101.47 \text{ mm}^2$$
$$P = 46.4 \text{ mm}$$