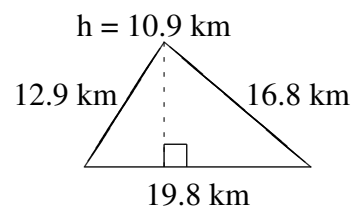
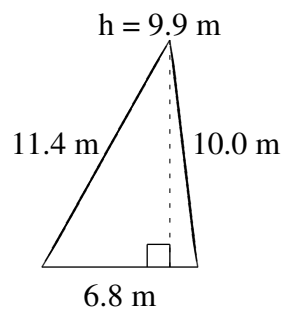
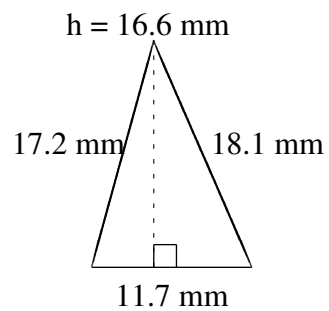
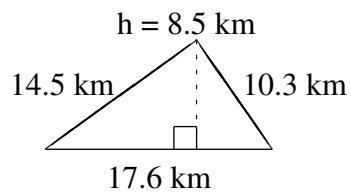
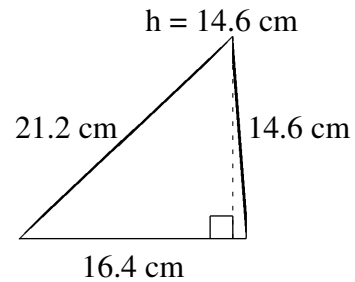
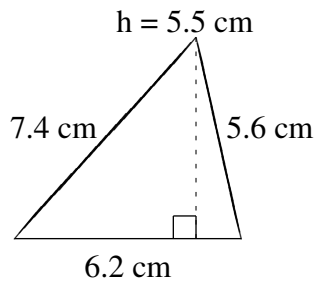


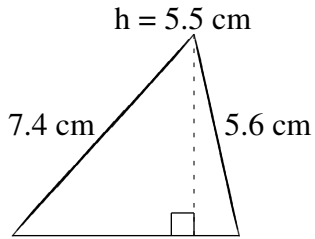
## Aire et Périmètre de Triangles (D)

Trouvez l'aire et le périmètre de chaque triangle.

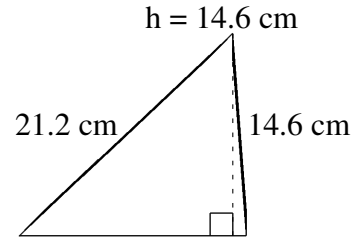


# Aire et Périmètre de Triangles (D) Solutions

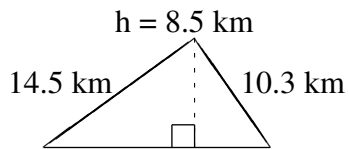
Trouvez l'aire et le périmètre de chaque triangle.



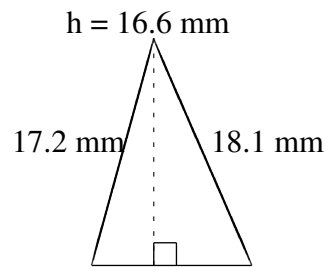
$$A = 17.05 \text{ cm}^2$$
$$P = 19.2 \text{ cm}$$



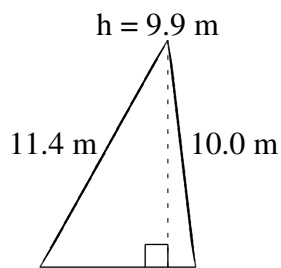
$$A = 119.72 \text{ cm}^2$$
$$P = 52.2 \text{ cm}$$



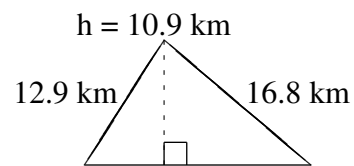
$$A = 74.80 \text{ km}^2$$
$$P = 42.4 \text{ km}$$



$$A = 97.11 \text{ mm}^2$$
$$P = 47.0 \text{ mm}$$



$$A = 33.66 \text{ m}^2$$
$$P = 28.2 \text{ m}$$



$$A = 107.91 \text{ km}^2$$
$$P = 49.5 \text{ km}$$