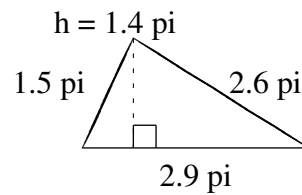
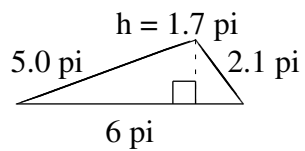
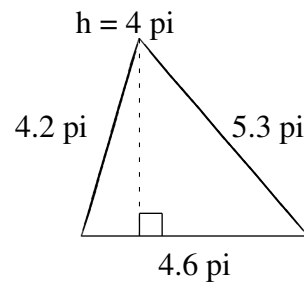
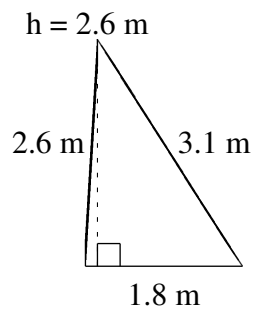
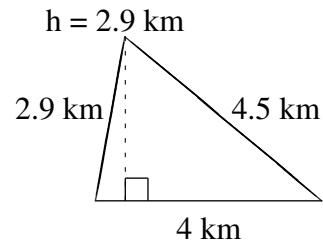
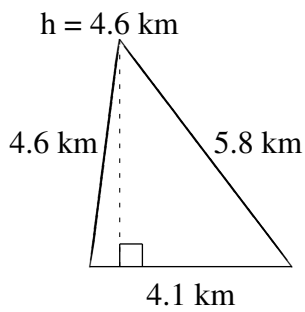


Aire et Périmètre de Triangles (H)

Trouvez l'aire et le périmètre de chaque triangle.



Aire et Périmètre de Triangles (H) Solutions

Trouvez l'aire et le périmètre de chaque triangle.

