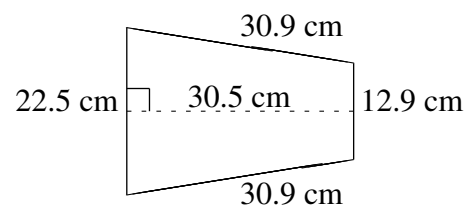
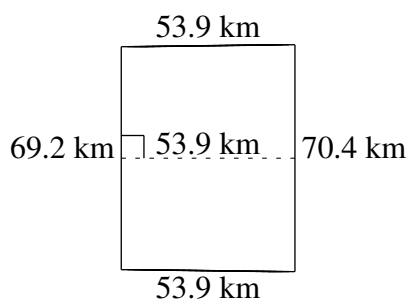

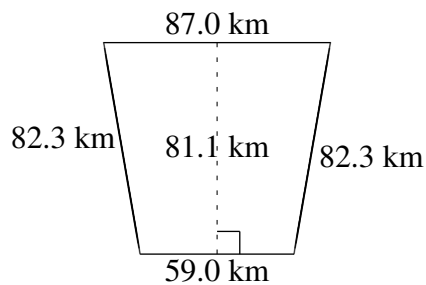
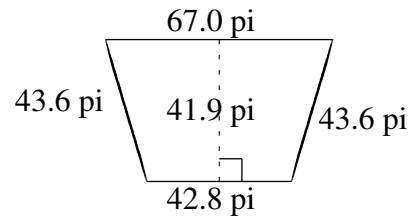
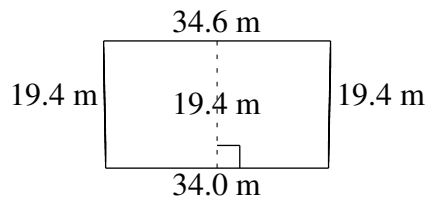


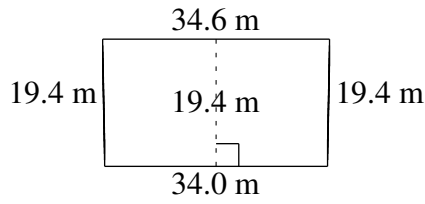
Aire et Périmètre de Trapèzes (J)

Trouvez l'aire et le périmètre de chaque trapèze.



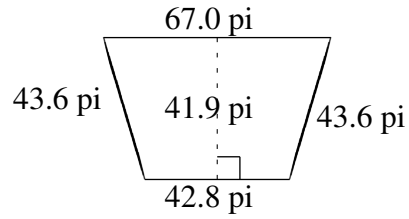
Aire et Périmètre de Trapèzes (J) Solutions

Trouvez l'aire et le périmètre de chaque trapèze.



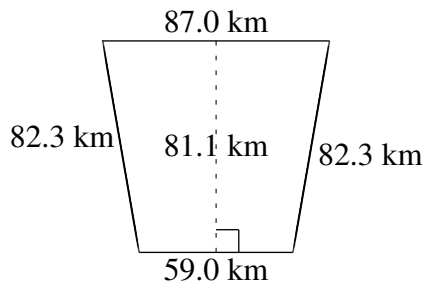
$$A = 665.42 \text{ m}^2$$

$$P = 107.4 \text{ m}$$



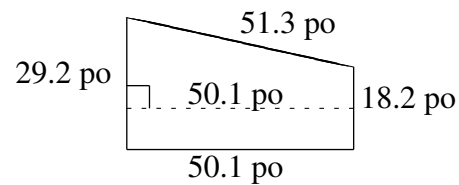
$$A = 2300.31 \text{ pi}^2$$

$$P = 197.0 \text{ pi}$$



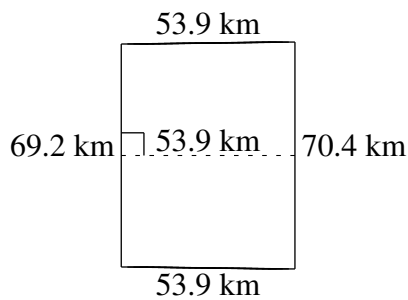
$$A = 5920.30 \text{ km}^2$$

$$P = 310.6 \text{ km}$$



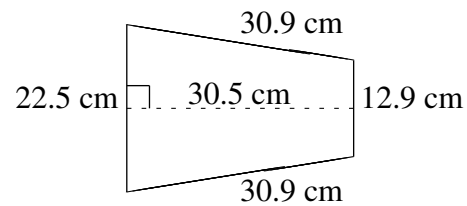
$$A = 1187.37 \text{ po}^2$$

$$P = 148.8 \text{ po}$$



$$A = 3762.22 \text{ km}^2$$

$$P = 247.4 \text{ km}$$



$$A = 539.85 \text{ cm}^2$$

$$P = 97.2 \text{ cm}$$