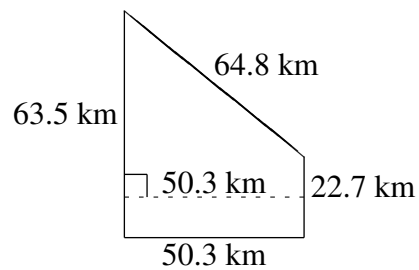
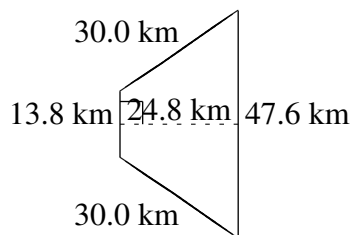
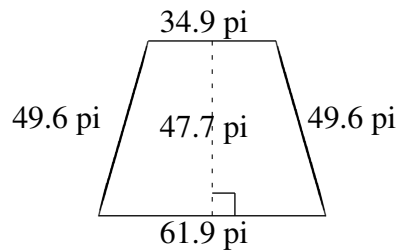
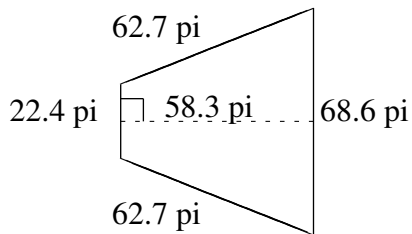
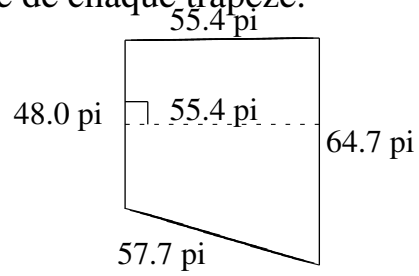
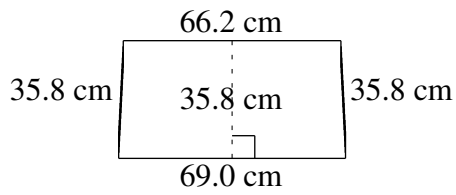


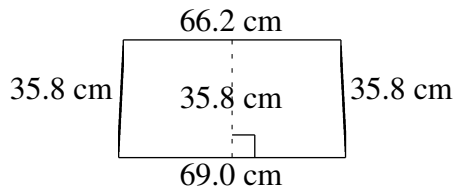
Aire et Périmètre de Trapèzes (B)

Trouvez l'aire et le périmètre de chaque trapèze.



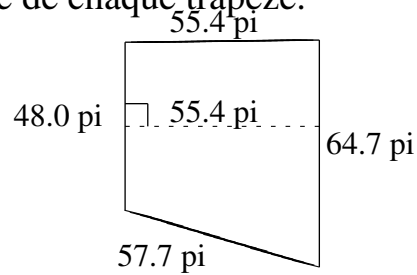
Aire et Périmètre de Trapèzes (B) Solutions

Trouvez l'aire et le périmètre de chaque trapèze.



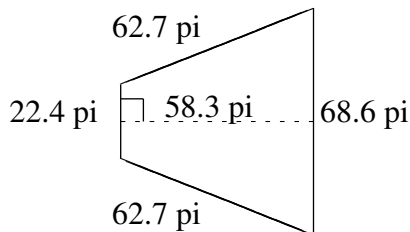
$$A = 2420.08 \text{ cm}^2$$

$$P = 206.8 \text{ cm}$$



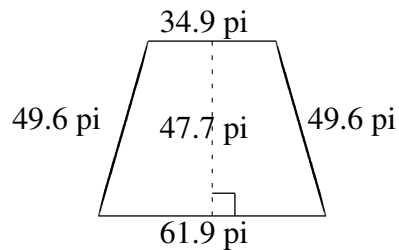
$$A = 3121.79 \text{ pi}^2$$

$$P = 225.8 \text{ pi}$$



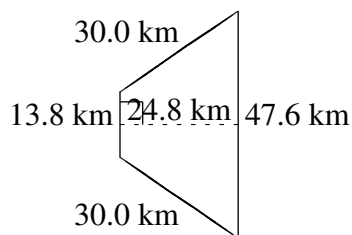
$$A = 2652.65 \text{ pi}^2$$

$$P = 216.4 \text{ pi}$$



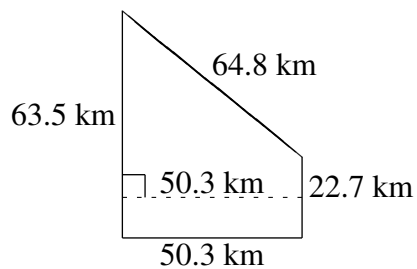
$$A = 2308.68 \text{ pi}^2$$

$$P = 196.0 \text{ pi}$$



$$A = 761.36 \text{ km}^2$$

$$P = 121.4 \text{ km}$$



$$A = 2167.93 \text{ km}^2$$

$$P = 201.3 \text{ km}$$