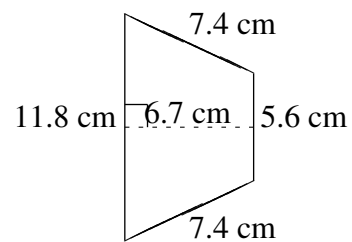
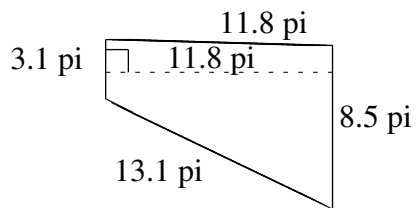
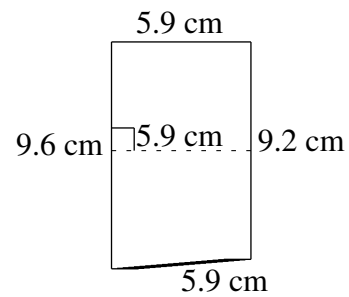
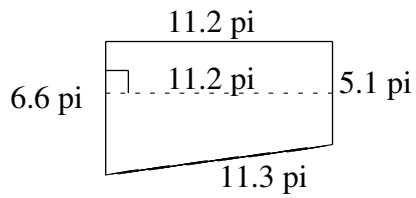
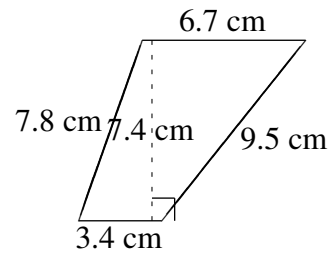
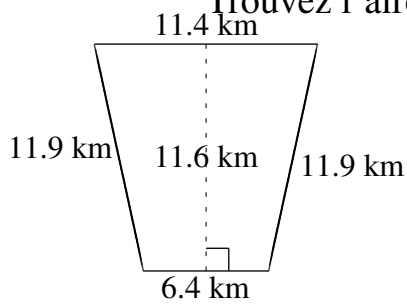


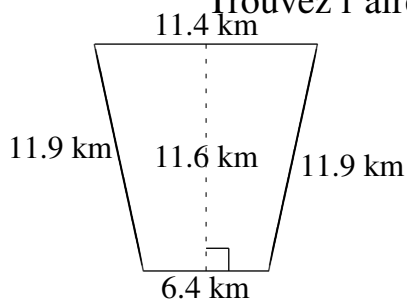
Aire et Périmètre de Trapèzes (I)

Trouvez l'aire et le périmètre de chaque trapèze.



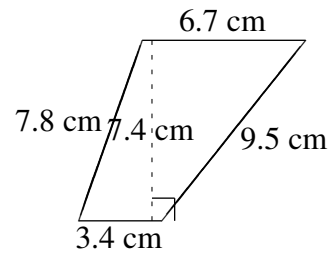
Aire et Périmètre de Trapèzes (I) Solutions

Trouvez l'aire et le périmètre de chaque trapèze.



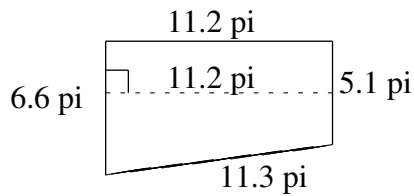
$$A = 103.24 \text{ km}^2$$

$$P = 41.6 \text{ km}$$



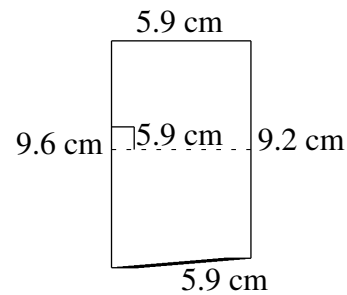
$$A = 37.37 \text{ cm}^2$$

$$P = 27.4 \text{ cm}$$



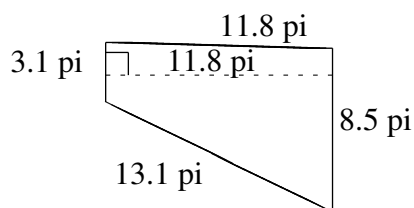
$$A = 65.52 \text{ pi}^2$$

$$P = 34.2 \text{ pi}$$



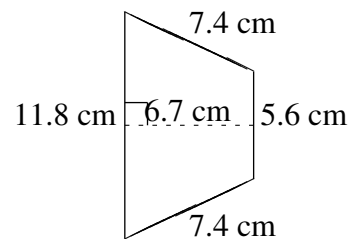
$$A = 55.46 \text{ cm}^2$$

$$P = 30.6 \text{ cm}$$



$$A = 68.44 \text{ pi}^2$$

$$P = 36.5 \text{ pi}$$



$$A = 58.29 \text{ cm}^2$$

$$P = 32.2 \text{ cm}$$