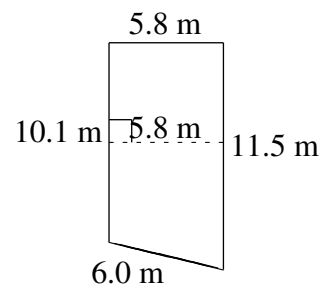
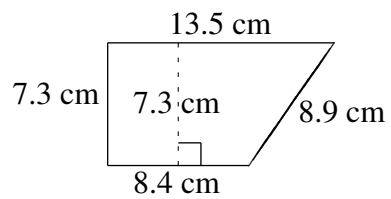
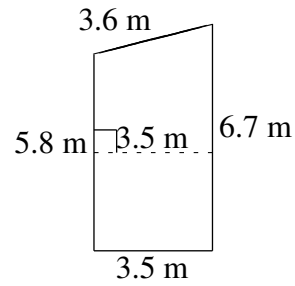
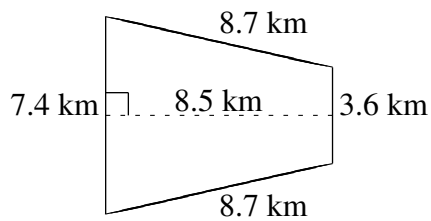
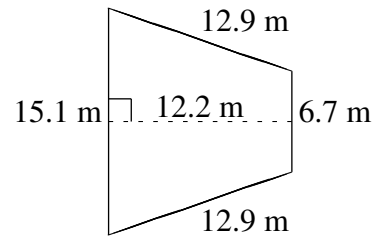
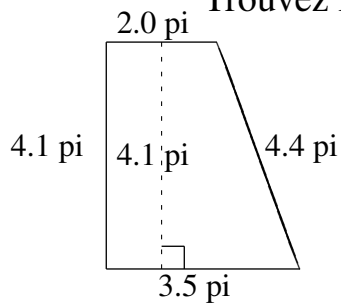


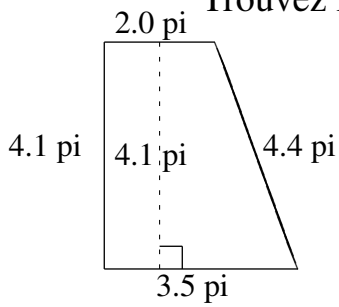
Aire et Périmètre de Trapèzes (F)

Trouvez l'aire et le périmètre de chaque trapèze.



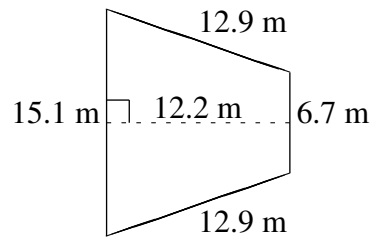
Aire et Périmètre de Trapèzes (F) Solutions

Trouvez l'aire et le périmètre de chaque trapèze.



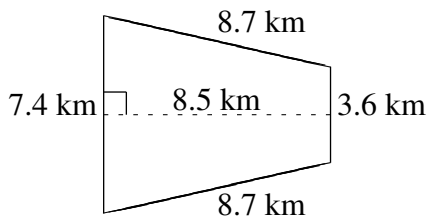
$$A = 11.275 \text{ pi}^2$$

$$P = 14.0 \text{ pi}$$



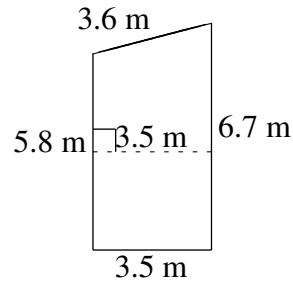
$$A = 132.98 \text{ m}^2$$

$$P = 47.6 \text{ m}$$



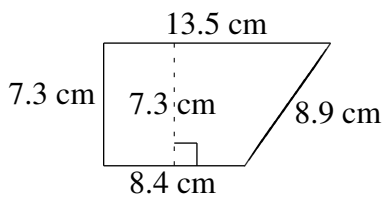
$$A = 46.75 \text{ km}^2$$

$$P = 28.4 \text{ km}$$



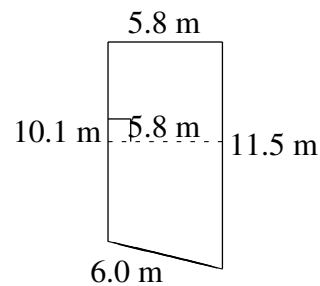
$$A = 21.875 \text{ m}^2$$

$$P = 19.6 \text{ m}$$



$$A = 79.935 \text{ cm}^2$$

$$P = 38.1 \text{ cm}$$



$$A = 62.64 \text{ m}^2$$

$$P = 33.4 \text{ m}$$