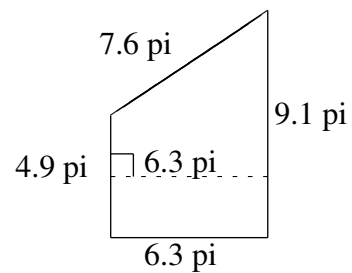
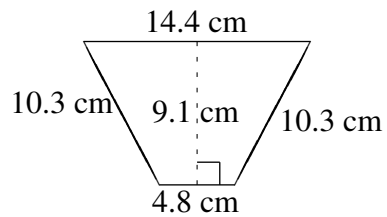
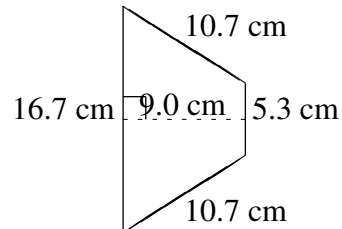
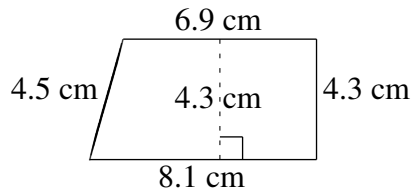
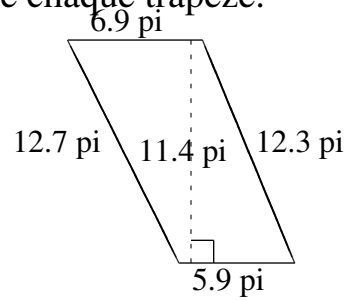
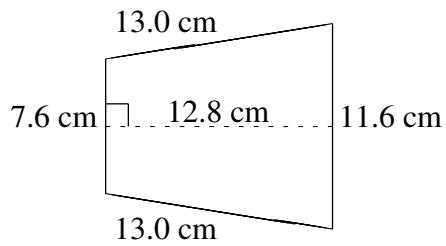


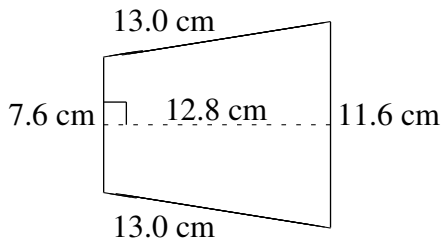
Aire et Périmètre de Trapèzes (C)

Trouvez l'aire et le périmètre de chaque trapèze.



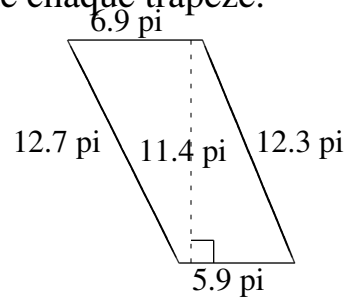
Aire et Périmètre de Trapèzes (C) Solutions

Trouvez l'aire et le périmètre de chaque trapèze.



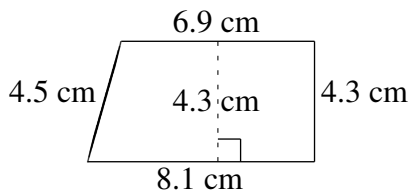
$$A = 122.88 \text{ cm}^2$$

$$P = 45.2 \text{ cm}$$



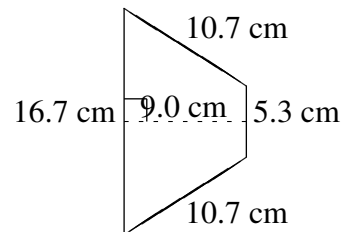
$$A = 72.96 \text{ pi}^2$$

$$P = 37.8 \text{ pi}$$



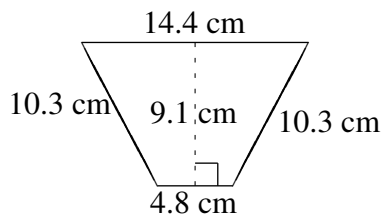
$$A = 32.25 \text{ cm}^2$$

$$P = 23.8 \text{ cm}$$



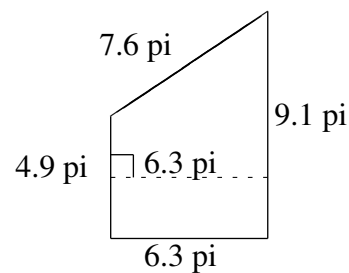
$$A = 99.00 \text{ cm}^2$$

$$P = 43.4 \text{ cm}$$



$$A = 87.36 \text{ cm}^2$$

$$P = 39.8 \text{ cm}$$



$$A = 44.10 \text{ pi}^2$$

$$P = 27.9 \text{ pi}$$