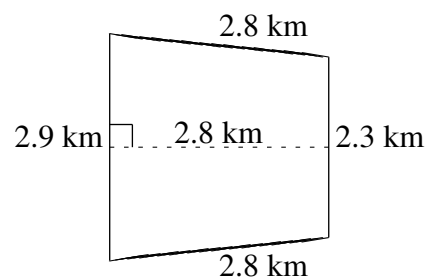
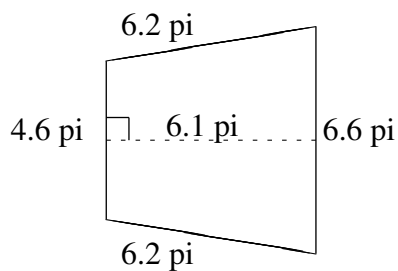
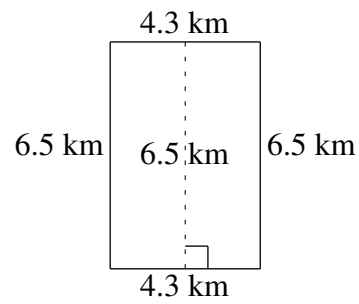
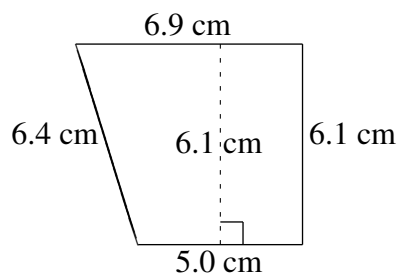
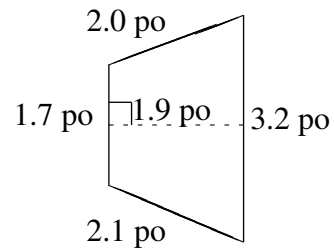
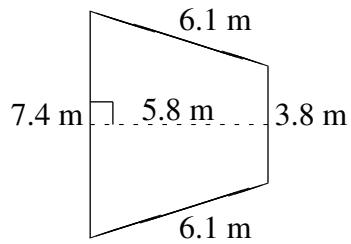


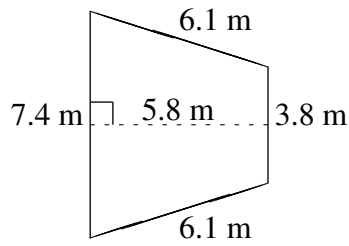
# Aire et Périmètre de Trapèzes (G)

Trouvez l'aire et le périmètre de chaque trapèze.



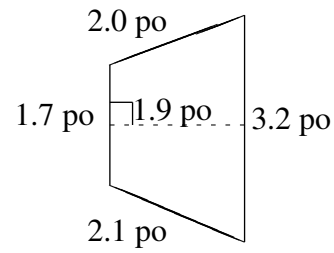
# Aire et Périmètre de Trapèzes (G) Solutions

Trouvez l'aire et le périmètre de chaque trapèze.



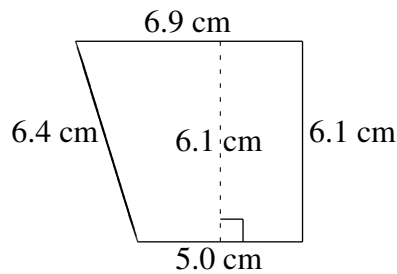
$$A = 32.48 \text{ m}^2$$

$$P = 23.4 \text{ m}$$



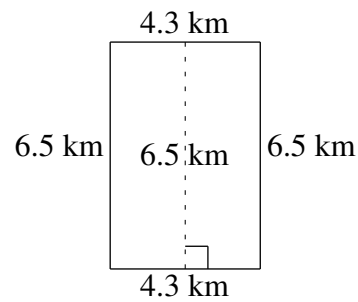
$$A = 4.655 \text{ po}^2$$

$$P = 9.0 \text{ po}$$



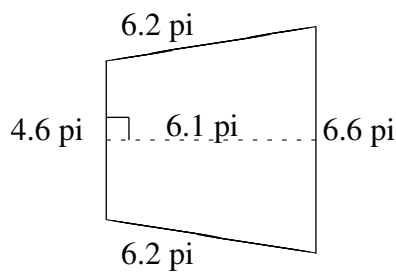
$$A = 36.295 \text{ cm}^2$$

$$P = 24.4 \text{ cm}$$



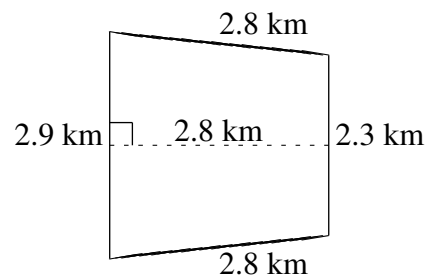
$$A = 27.95 \text{ km}^2$$

$$P = 21.6 \text{ km}$$



$$A = 34.16 \text{ pi}^2$$

$$P = 23.6 \text{ pi}$$



$$A = 7.28 \text{ km}^2$$

$$P = 10.8 \text{ km}$$