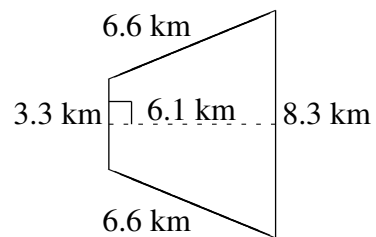
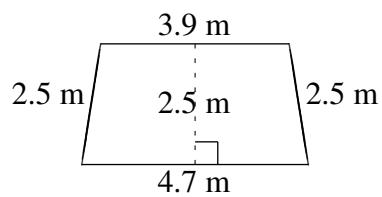
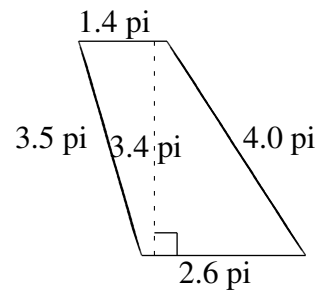
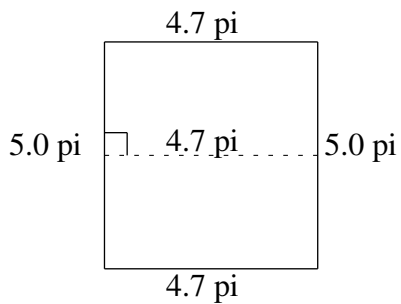
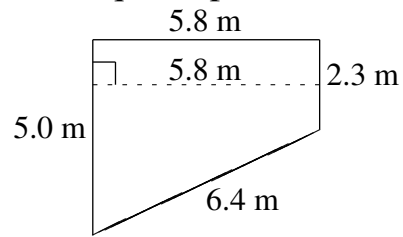
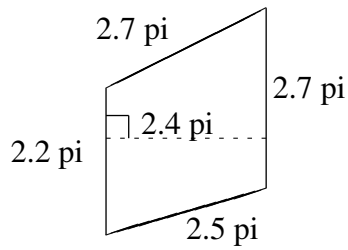


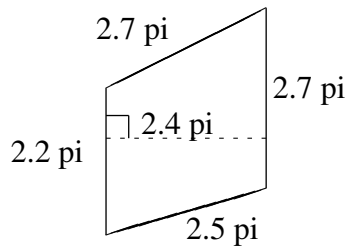
Aire et Périmètre de Trapèzes (C)

Trouvez l'aire et le périmètre de chaque trapèze.



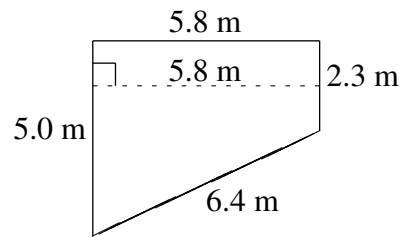
Aire et Périmètre de Trapèzes (C) Solutions

Trouvez l'aire et le périmètre de chaque trapèze.



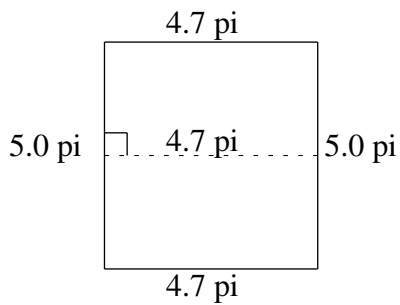
$$A = 5.88\text{ pi}^2$$

$$P = 10.1\text{ pi}$$



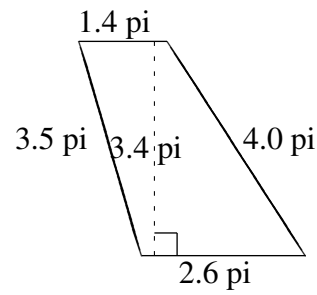
$$A = 21.17\text{ m}^2$$

$$P = 19.5\text{ m}$$



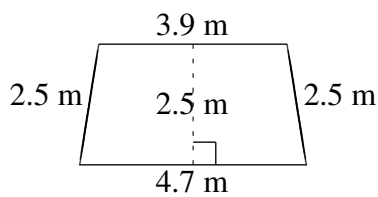
$$A = 23.50\text{ pi}^2$$

$$P = 19.4\text{ pi}$$



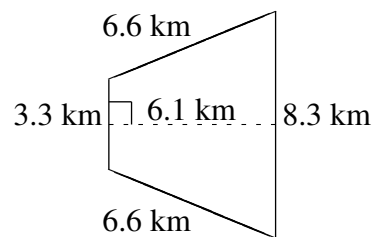
$$A = 6.80\text{ pi}^2$$

$$P = 11.5\text{ pi}$$



$$A = 10.75\text{ m}^2$$

$$P = 13.6\text{ m}$$



$$A = 35.38\text{ km}^2$$

$$P = 24.8\text{ km}$$