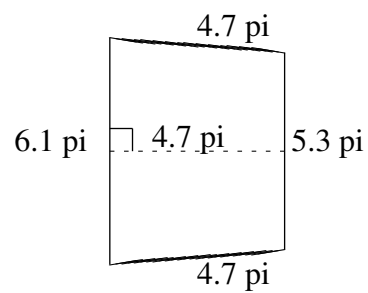
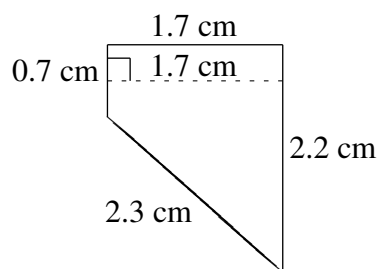
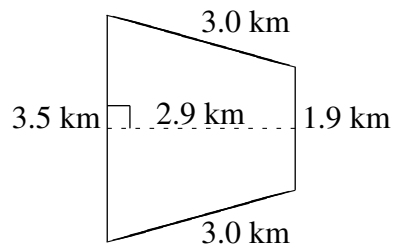
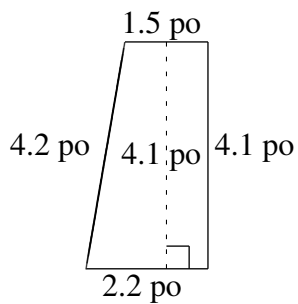
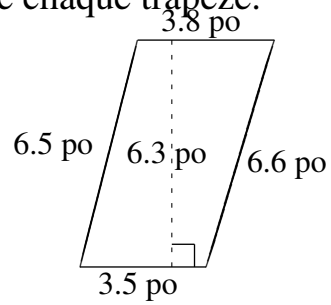
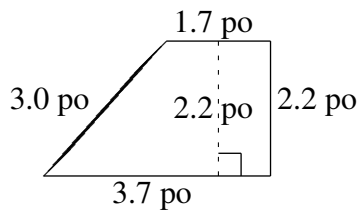


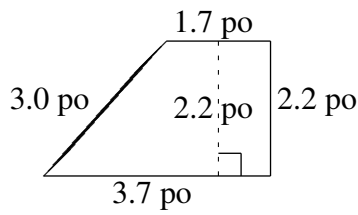
Aire et Périmètre de Trapèzes (B)

Trouvez l'aire et le périmètre de chaque trapèze.



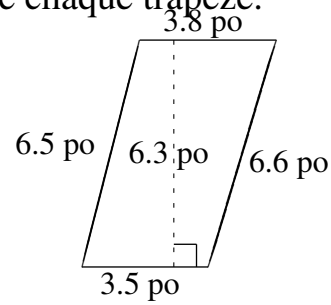
Aire et Périmètre de Trapèzes (B) Solutions

Trouvez l'aire et le périmètre de chaque trapèze.



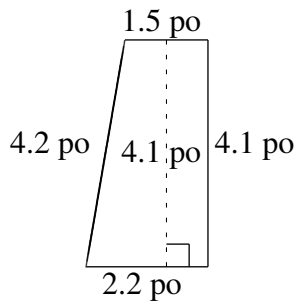
$$A = 5.94 \text{ po}^2$$

$$P = 10.6 \text{ po}$$



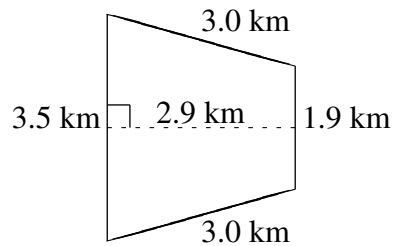
$$A = 22.995 \text{ po}^2$$

$$P = 20.4 \text{ po}$$



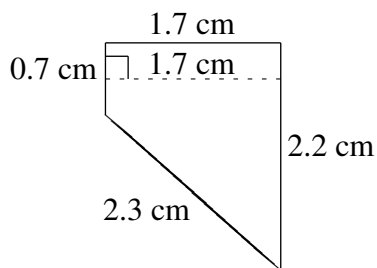
$$A = 7.585 \text{ po}^2$$

$$P = 12.0 \text{ po}$$



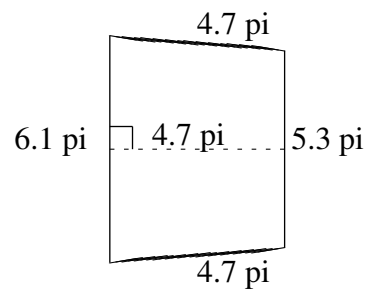
$$A = 7.83 \text{ km}^2$$

$$P = 11.4 \text{ km}$$



$$A = 2.465 \text{ cm}^2$$

$$P = 6.9 \text{ cm}$$



$$A = 26.79 \text{ pi}^2$$

$$P = 20.8 \text{ pi}$$